

## Combined Graduate level Examination 2023 Tier I

Roll Number	
Candidate Name	
Venue Name	
Exam Date	18/07/2023
Exam Time	5:15 PM - 6:15 PM
Subject	Combined Graduate Level Examination Tier I 2023

Section : General Intelligence and Reasoning

**Q.1** Select the option that is related to the fifth letter-cluster in the same way as the second letter-cluster is related to the first letter-cluster and the fourth letter-cluster is related to the third letter-cluster.

TABLE : FNEEY :: CROWN : OYRVH :: BEAUTY : ?

- Ans
- 1. YTUEJH
  - 2. YTUAEB
  - 3. ZVXEJH
  - 4. ZUVBFC

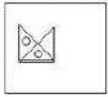
Question ID : 26433090019  
Status : Answered  
Chosen Option : 3

**Q.2** Which of the following numbers will replace the question mark (?) in the given series?  
11, ?, 20, 29, 41, 56

- Ans
- 1. 16
  - 2. 13
  - 3. 15
  - 4. 14

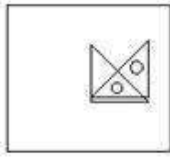
Question ID : 26433090932  
Status : Answered  
Chosen Option : 4

**Q.3** Select the correct mirror image of the given figure when the mirror is placed at the right side of the figure.

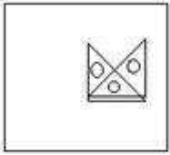


**Ans**

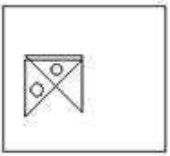
✓ 1.



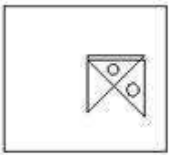
✗ 2.



✗ 3.



✗ 4.



Question ID : 26433068184  
Status : Answered  
Chosen Option : 1

**Q.4** The second number in the given number-pairs is obtained by performing certain mathematical operation(s) on the first number. The same operation(s) is/are followed in all the number-pairs except one. Find that odd number-pair.

- Ans**
- ✗ 1. 7 : 46
  - ✗ 2. 13 : 166
  - ✗ 3. 9 : 78
  - ✓ 4. 48 : 144

Question ID : 264330143707  
Status : Answered  
Chosen Option : 4

**Q.5** Priya pointed towards a man and said that he is her brother's paternal grandmother's only child. How is the man related to Priya?

- Ans**
- ✗ 1. Brother
  - ✗ 2. Paternal grandfather
  - ✓ 3. Father
  - ✗ 4. Son

Question ID : 264330118658  
Status : Answered  
Chosen Option : 1

**Q.6** Which of the following letter-clusters can replace the question mark (?) in the given series to make it logically complete?  
MIT, JEQ, GAN, DWK, ?

- Ans
- 1. ASH
  - 2. YRG
  - 3. ZRI
  - 4. YSJ

Question ID : 26433082556  
Status : Answered  
Chosen Option : 1

**Q.7** In a certain code language, "LAMP" is written as "66" and "OATS" is written as "53".  
How will "YESS" be written in that language?

- Ans
- 1. 51
  - 2. 55
  - 3. 45
  - 4. 40

Question ID : 264330130330  
Status : Answered  
Chosen Option : 4

**Q.8** In a certain code language, 'THIN' is coded as '1723' and 'WITH' is coded as '2417'.  
What is the code for 'W' in the given code language?

- Ans
- 1. 4
  - 2. 1
  - 3. 7
  - 4. 2

Question ID : 264330126009  
Status : Answered  
Chosen Option : 1

**JOB SEEKER**

NOT USELESS IT'S USED LESS

**Q.9** Select the figure from the options that can replace the question mark (?) and complete the given pattern.

T	3	O	3	
P	O	Δ	Δ	T
P	P	Δ	T	T
3	O	3	Δ	P
				?

Ans

✓ 1.

	Δ	
P	T	O
	3	

✗ 2.

	Δ	
P	3	T
	O	

✗ 3.

	Δ	
O	P	T
	3	

✗ 4.

	Δ	
P	O	T
	3	

**JOB SEEKER**  
NOT USELESS IT'S USED LESS

Question ID : 26433085788

Status : **Marked For Review**

Chosen Option : 1

Q.10 Select the option that is related to the fifth number in the same way as the second number is related to the first number and the fourth number is related to the third number.

9 : 79 :: 11 : 119 :: 7 : ?

- Ans
- 1. 41
  - 2. 49
  - 3. 47
  - 4. 51

Question ID : 264330143715

Status : Answered

Chosen Option : 3

Q.11 Select the option that represents the correct order of the given words as they would appear in an English dictionary.

1. Banished
2. Bandage
3. Bannister
4. Bankrupt
5. Bandwagon
6. Banquet

- Ans
- 1. 2, 5, 1, 3, 4, 6
  - 2. 5, 2, 1, 4, 3, 6
  - 3. 2, 5, 1, 4, 3, 6
  - 4. 2, 5, 4, 1, 3, 6

Question ID : 264330134284

Status : Answered

Chosen Option : 3

Q.12 Three statements are given followed by three conclusions numbered I, II and III. Assuming the statements to be true, even if they seem to be at variance with commonly known facts, decide which of the conclusions logically follow(s) from the statements.

Statements:

- All pencils are colours.
- All colours are paints.
- Some paints are drawings.

Conclusions:

- I. Some pencils are drawings.
- II. Some paints are colours.
- III. Some colours are pencils.

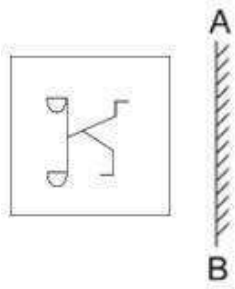
- Ans
- 1. Only conclusions I and III follow
  - 2. Only conclusions II and III follow
  - 3. Only conclusions I and II follow
  - 4. All conclusions follow

Question ID : 26433090922

Status : Answered

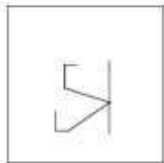
Chosen Option : 2

Q.13 Select the correct mirror image of the given figure when the mirror is placed at AB.

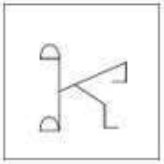


Ans

1.



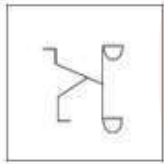
2.



3.



4.



JOB SEEKER  
NOT USELESS IT'S USED LESS

Question ID : 264330106443

Status : Answered

Chosen Option : 4

Q.14 Select the option that represents the letters that, when placed from left to right in the following blanks, will complete the letter-series.

Z X C \_ B Z \_ \_ V B \_ X E V \_ Z \_ \_ V B

Ans  1. U Y E Z B X F

2. U X D Z B X F

3. V Y E Z B X G

4. V X D Z B X F

Question ID : 264330143747

Status : Answered

Chosen Option : 4

Q.15 Select the correct mirror image of the given figure when the mirror is placed at MN as shown below.

FLqV67eS | M  
N

- Ans
- ✓ 1. 2e7θVpJƒ
  - ✗ 2. 2e7θVpJƒ
  - ✗ 3. 2e7θVpLƒ
  - ✗ 4. 2e7θVpJƒ

Question ID : 264330103140

Status : Answered

Chosen Option : 1

Q.16 Select the correct combination of mathematical signs to sequentially fill in the circles and to balance the given equation.

45 ○ 9 ○ 3 ○ 25 ○ 55 ○ 15

- Ans
- ✗ 1. ÷, ×, -, =, ×
  - ✗ 2. ÷, ×, =, +, +
  - ✗ 3. +, =, +, ×, +
  - ✓ 4. ÷, ×, +, =, -

JOB SEEKER

NOT USELESS IT'S USED LESS

Question ID : 264330104007

Status : Answered

Chosen Option : 4

Q.17 Select the figure that will replace the question mark (?) in the following figure series.

T B □ D	D L B △	L D △ B	B 6 D T	
O L A 6	6 S □ O	O 6 S □	□ A △ O	?
3 S 9 △	T 9 A 3	3 A 9 T	L 9 S 3	

Ans

✗ 1.

3 B 6 D
T □ A △
O L 9 S

✗ 2.

T B 6 D
O □ A △
3 L 9 S

✗ 3.

6 B T D
O □ A △
9 L 3 S

✓ 4.

6 B T D
O □ A △
3 S 9 L



Question ID : 264330143833  
 Status : Answered  
 Chosen Option : 2

Q.18 Which two numbers and two signs should be interchanged in the following equation to make it correct?

$$18 - 6 + 11 \times 5 + 18 = 113$$

- Ans
- ✗ 1. 6 and 5, + and ×
  - ✗ 2. 18 and 5, + and ×
  - ✓ 3. 6 and 5, - and ×
  - ✗ 4. 18 and 5, - and ×

Question ID : 26433097215  
 Status : Answered  
 Chosen Option : 3



**Q.19** Select the option that is related to the fifth term in the same way as the second term is related to the first term and the fourth term is related to the third term.  
 $121 : 10 :: 256 : 15 :: 441 : ?$

- Ans  1. 17  
 2. 20  
 3. 21  
 4. 19

Question ID : 26433082873  
Status : Answered  
Chosen Option : 2

**Q.20** Select the set in which the numbers are related in the same way as are the numbers of the following sets.  
(NOTE: Operations should be performed on the whole numbers, without breaking down the numbers into its constituent digits. For e.g. 13 – Operations on 13 such as adding/subtracting/multiplying etc. to 13 can be performed. Breaking down 13 into 1 and 3 and then performing mathematical operations on 1 and 3 is not allowed.)

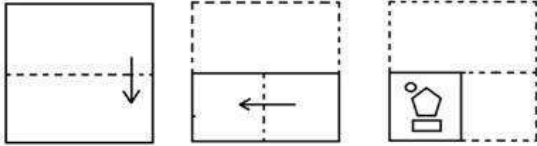
(168, 35, 143)  
(182, 65, 127)

- Ans  1. (142, 83, 69)  
 2. (253, 99, 154)  
 3. (203, 89, 117)  
 4. (159, 62, 87)

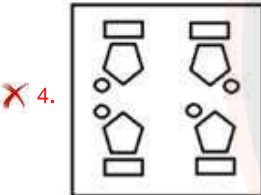
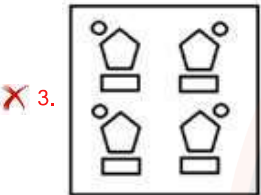
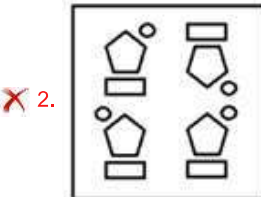
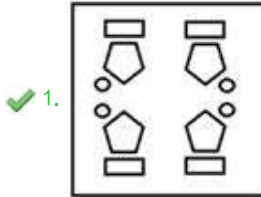
Question ID : 264330131292  
Status : Answered  
Chosen Option : 1

**JOB SEEKER**  
NOT USELESS IT'S USED LESS

**Q.21** The sequence of folding a piece of paper and the manner in which the folded paper has been cut is shown below. Choose the figure that would most closely resemble the unfolded form of the paper.



Ans



**JOB SEEKER**  
NOT USELESS IT'S USED LESS

Question ID : 26433067446

Status : Answered

Chosen Option : 1

**Q.22** Select the option that is related to the fifth letter-cluster in the same way as the second letter-cluster is related to the first letter-cluster and the fourth letter-cluster is related to the third letter-cluster.

BETTER : EBTRE :: ANSWER : NAWSRE :: ACCEPT : ?

Ans ✗ 1. CAECPT

✓ 2. CAECTP

✗ 3. CACPET

✗ 4. CACETP

Question ID : 26433086975

Status : Answered

Chosen Option : 2

**Q.23** Three Statements are given followed by Three conclusions numbered I, II and III. Assuming the statements to be true, even if they seem to be at variance with commonly known facts, decide which of the conclusions logically follow(s) from the statements.

**Statements:**

Some sweets are chocolates.  
All chocolates are cookies.  
Some cookies are healthy.

**Conclusions:**

I. Some sweets are cookies.  
II. Some cookies are chocolates.  
III. Some chocolates are sweets .

- Ans  1. Both conclusions II and III follow.  
 2. Both conclusions I and III follow.  
 3. Both conclusions I and II follow.  
 4. All conclusions follow.

Question ID : 26433083096

Status : Answered

Chosen Option : 4

**Q.24** Select the option that is related to the fifth letter-cluster in the same way as the second letter-cluster is related to the first letter-cluster and the fourth letter-cluster is related to the third letter-cluster.

PARROT : PTRKOM :: RECIPE : RXCBPX : RELISH : ?

- Ans  1. HJUIOK  
 2. LACXIO  
 3. RXLBSA  
 4. TFSDBM

Question ID : 26433069027

Status : Answered

Chosen Option : 3

**Q.25** Select the set in which the numbers are related in the same way as are the numbers of the given set.

(NOTE: Operations should be performed on the whole numbers, without breaking down the numbers into its constituent digits. E.g. 13 – Operations on 13 such as adding /subtracting /multiplying etc. to 13 can be performed. Breaking down 13 into 1 and 3 and then performing mathematical operations on 1 and 3 is not allowed.)

(9, 26, 53)

(8, 23, 47)

- Ans  1. (5, 14, 29)  
 2. (6, 17, 36)  
 3. (11, 32, 56)  
 4. (7, 20, 42)

Question ID : 26433078959

Status : Answered

Chosen Option : 1

**Q.1 In which state is the Chithirai festival celebrated?**

- Ans  1. Punjab  
 2. Tamil Nadu  
 3. Rajasthan  
 4. Meghalaya

Question ID : 264330113174  
Status : Answered  
Chosen Option : 4

**Q.2 Kalbelia dance is generally performed in which of the following states of India?**

- Ans  1. Tamil Nadu  
 2. Punjab  
 3. Rajasthan  
 4. Assam

Question ID : 26433094868  
Status : Answered  
Chosen Option : 3

**Q.3 The rule of the English East India company was ended in British India under the Government of India Act, \_\_\_\_\_.**

- Ans  1. 1858  
 2. 1857  
 3. 1859  
 4. 1856

Question ID : 264330111393  
Status : Answered  
Chosen Option : 2

**Q.4 Which of the following is a highly electropositive element that readily gives up an electron in order to obtain a stable electronic configuration?**

- Ans  1. Cl  
 2. O  
 3. Na  
 4. N

Question ID : 264330109900  
Status : Answered  
Chosen Option : 3

**Q.5 The famous scientist, Albert Einstein, was inspired by whose idea of non-violence?**

- Ans  1. Mahatma Gandhi  
 2. Vardhaman Mahavira  
 3. Gautam Buddha  
 4. BR Ambedkar

Question ID : 264330130565  
Status : Answered  
Chosen Option : 1

**Q.6 Which of the following is INCORRECTLY matched?**

- Ans  1. Montane climate - Uttar Pradesh, Bihar and Jharkhand  
 2. Tropical monsoon climate - The Western Ghats, the Malabar Coast and southern Assam  
 3. Tropical semi-arid (steppe) climate - Karnataka, central Maharashtra, some parts of Tamil Nadu and Andhra Pradesh  
 4. Hot deserts, arid climate - Rajasthan and some parts of Gujarat

Question ID : 264330109942  
Status : Not Answered  
Chosen Option : --

**Q.7 Diwan-i-Arz was essentially the department of \_\_\_\_\_ under Delhi Sultanate.**

- Ans  1. financial services  
 2. court ceremonies  
 3. military services  
 4. royal karkhanas

Question ID : 264330114080  
Status : Not Answered  
Chosen Option : --

**Q.8 What is the full form of IADP?**

- Ans  1. Intensive Agricultural District Programme  
 2. Indian Agricultural Development Programme  
 3. Integrated Agricultural District Plan  
 4. Intensive Agricultural Development Project

Question ID : 264330112482  
Status : Answered  
Chosen Option : 2

**Q.9** Who among the following has been appointed as the new Chairperson of the National Company Law Appellate Tribunal (NCLAT), for a period of four years or until he attains the age of 70 years, whichever is the earliest in November 2021?

- Ans
- 1. Justice Vikram Nath
  - 2. Justice BV Nagarathna
  - 3. Justice Ashok Bhushan
  - 4. Justice Abhay Oka

Question ID : 26433081853  
Status : Not Answered  
Chosen Option : --

**Q.10** Under which policy has the Union Ministry of Power launched a scheme for procurement of aggregate power of 4500 MW for five years?

- Ans
- 1. Urja Sanchay Policy
  - 2. Shakti Policy
  - 3. Nai Urja Policy
  - 4. Gatishakti Policy

Question ID : 264330137270  
Status : Answered  
Chosen Option : 3

**Q.11** Which element was arbitrarily assigned a value of 4.0 in the 'Halogens' section in 1922 by Linus Pauling, an American scientist?

- Ans
- 1. Fluorine
  - 2. Iodine
  - 3. Astatine
  - 4. Bromine

Question ID : 264330141695  
Status : Not Answered  
Chosen Option : --

**Q.12** The MITRA scheme was first announced in the Union Budget for 2021-22 to set up world-class infrastructure in which sector?

- Ans
- 1. Automobiles
  - 2. Textile industry
  - 3. Defence manufacturing
  - 4. Pharmaceuticals

Question ID : 264330111309  
Status : Answered  
Chosen Option : 2

Q.13 Where in India are the Sundari trees that provide durable and hard timber found?

- Ans  1. Tropical Deciduous Forests  
 2. Mangrove Forests  
 3. Montane Forests  
 4. Tropical Evergreen Forests

Question ID : 264330110654  
Status : Answered  
Chosen Option : 2

Q.14 Which of the following is NOT included in domestic income?

- Ans  1. Income earned by the residents of the country  
 2. Income earned by the non-residents outside the country  
 3. Income earned by all the employees of the country  
 4. Profit of all the industries of the country

Question ID : 26433064859  
Status : Answered  
Chosen Option : 2

Q.15 As per National Family Health Survey (NFHS 5) 2019-21, what percentage of women have a bank or savings account that they themselves use?

- Ans  1. 68.3%  
 2. 78.6%  
 3. 87.7%  
 4. 58.5%

Question ID : 264330137283  
Status : Not Answered  
Chosen Option : --

Q.16 Tansen, who was included in the Navaratnas of Akbar, was an expert in playing which of the following musical instruments?

- Ans  1. Nagada  
 2. Veena  
 3. Sarangi  
 4. Rabab

Question ID : 26433074121  
Status : Not Answered  
Chosen Option : --

Q.17 Match the following countries with respect to their ranking on the Global Hunger Index 2022 out of 121 countries.

Country	Rank
1. India	a. 99
2. Pakistan	b. 107
3. Nepal	c. 81

- Ans
- 1. 1-c, 2-a, 3-b
  - 2. 1-b, 2-c, 3-a
  - 3. 1-a, 2-b, 3-c
  - 4. 1-b, 2-a, 3-c

Question ID : 264330132764  
Status : Answered  
Chosen Option : 2

Q.18 Mitochondria is NOT found in \_\_\_\_\_.

- Ans
- 1. yeast
  - 2. bacteria
  - 3. algae
  - 4. fungi

Question ID : 26433066491  
Status : Answered  
Chosen Option : 2

Q.19 Which of the following pairs is/are correctly matched regarding the terminology used in the Parliament?

- A.Appropriation Bill — A Money Bill passed for providing for the withdrawal or appropriation from and out of the Consolidated Fund of India
- B.Demand for Grants — Earmarking of budgetary allocation for meeting only planned expenditure of a Ministry/Department
- C.Short Duration Discussion — For raising a discussion on a matter of urgent public importance for which a notice has to be given by a Member and supported by 50 Members

- Ans
- 1. A, B and C
  - 2. B and C only
  - 3. A only
  - 4. A and C only

Question ID : 264330119704  
Status : Not Answered  
Chosen Option : --



**Q.20 Sangeet Natak Akademi Award (Akademi Puraskar) for the year 2020 was awarded to Meenakshi Chitharanjan for her contribution to which of the following?**

**Ans**  1. Bharatanatyam

2. Odissi

3. Manipuri

4. Kuchipudi

Question ID : 264330130895

Status : Answered

Chosen Option : 1

**Q.21 Select the INCORRECT statement about Phylum Arthropoda.**

**Ans**  1. Class Insecta is the largest class of Phylum Arthropoda.

2. Lignin is the main component of the exoskeletons of arthropods.

3. Over 85% of all the known animal species are arthropods.

4. Phylum Arthropoda comprises a wide diversity of animals with hard exoskeletons and jointed appendages.

Question ID : 264330112812

Status : Not Answered

Chosen Option : --

**Q.22 \_\_\_\_\_ countries participated in the Tokyo Paralympic 2020.**

**Ans**  1. 163

2. 161

3. 164

4. 162

Question ID : 264330109680

Status : Answered

Chosen Option : 1

**Q.23 Who sent the Greek ambassador Megasthenes to the court of Chandragupta Maurya?**

**Ans**  1. Seleucus

2. Tolmi

3. Dionysus

4. Sikandar

Question ID : 264330114018

Status : Answered

Chosen Option : 1

Q.24 Which of the following amendment acts included Fundamental Duties in the Constitution of India?

- Ans
- 1. 40<sup>nd</sup> Amendment Act
  - 2. 42<sup>nd</sup> Amendment Act
  - 3. 41<sup>st</sup> Amendment Act
  - 4. 39<sup>th</sup> Amendment Act

Question ID : 264330110563  
Status : Answered  
Chosen Option : 2

Q.25 Which of the following states recognise the Dahi Handi as a sports event?

- Ans
- 1. Maharashtra
  - 2. Bihar
  - 3. Madhya Pradesh
  - 4. Uttar Pradesh

Question ID : 264330109718  
Status : Answered  
Chosen Option : 4

Section : Quantitative Aptitude

Q.1 Simplify the following expression.

$$[\sqrt{25} + 12 \div 3 - \{20 + (16 \text{ of } 8 \div 16) - (54 \div 18 \text{ of } \frac{1}{2})\}]$$

- Ans
- 1. -13
  - 2. 12
  - 3. 22
  - 4. 0

Question ID : 26433063186  
Status : Answered  
Chosen Option : 1

Q.2 If  $a + b + c = 6$  and  $a^2 + b^2 + c^2 = 14$ , then what is the value of  $(a - b)^2 + (b - c)^2 + (c - a)^2$ ?

- Ans
- 1. -8
  - 2. 8
  - 3. 10
  - 4. 6

Question ID : 264330131362  
Status : Answered  
Chosen Option : 4

**Q.3** An amount becomes double in 8 years on simple interest. In how many years would Rs.25,000 become Rs.1,00,000 with the same rate of interest?

- Ans
- 1. 32
  - 2. 28
  - 3. 16
  - 4. 24

Question ID : 264330106094

Status : Answered

Chosen Option : 4

**Q.4** The marked price on a book is ₹1,000. In a book fair, it is available for sale with a discount scheme offering two successive discounts of 12% and 8%. What is the final selling price (in ₹) of the book for a customer (rounded off to the nearest integer)?

- Ans
- 1. 810
  - 2. 790
  - 3. 825
  - 4. 800

Question ID : 264330103964

Status : Answered

Chosen Option : 1

**Q.5** A and B invested money in a business in the ratio of 7 : 5. If 15% of the total profit goes for charity, and A's share in the profit is Rs.5,950, then what is the total profit?

- Ans
- 1. Rs.12,500
  - 2. Rs.12,000
  - 3. Rs.10,500
  - 4. Rs.11,750

Question ID : 26433082369

Status : Answered

Chosen Option : 2

**Q.6** A shopkeeper purchases six small cold drink bottles for ₹100. For how much should he sell one such bottle to get a profit of 20%?

- Ans
- 1. ₹22
  - 2. ₹20
  - 3. ₹21
  - 4. ₹23

Question ID : 26433091538

Status : Answered

Chosen Option : 2

Q.7 Find the value of the given expression.

$$\frac{4}{3} \tan^2 45^\circ + 3 \cos^2 30^\circ - 2 \sec^2 30^\circ - \frac{3}{4} \cot^2 60^\circ$$

Ans

✓ 1.  $\frac{2}{3}$

✗ 2.  $\frac{3}{2}$

✗ 3.  $\frac{\sqrt{2}}{3}$

✗ 4.  $\frac{3}{\sqrt{2}}$

Question ID : 264330126615

Status : Answered

Chosen Option : 1

Q.8 Meenu is 38 years old. Her daughter is 8 years old. In how many years will Meenu be double her daughter's age?

Ans ✓ 1. 22

✗ 2. 25

✗ 3. 20

✗ 4. 24

Question ID : 264330145546

Status : Answered

Chosen Option : 1

Q.9 Shatabdi Express train covers 700 km in 5 hours and another 1012 km in 11 hours. What is the average speed of the train (in metres/second)?

Ans ✗ 1. 107

✗ 2.  $385\frac{1}{5}$

✓ 3.  $29\frac{13}{18}$

✗ 4. 27

Question ID : 264330123986

Status : Answered

Chosen Option : 3

Q.10 In a company, a piece of work can be completed in 4, 6 and 18 days alone by R, S and T, respectively. In how many days will the work be completed if they work together? (Rounded off to 2 decimal places)

- Ans
- 1. 3.32
  - 2. 2.12
  - 3. 2.42
  - 4. 3.21

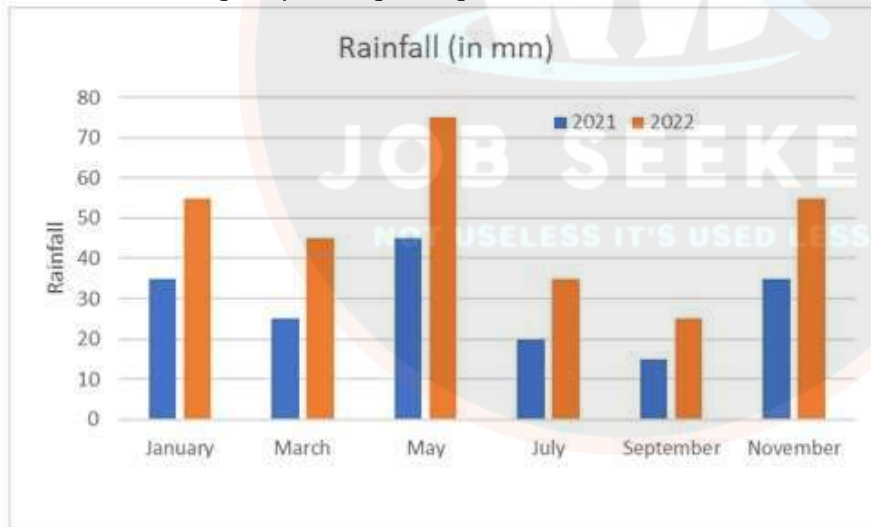
Question ID : 264330112233  
Status : Answered  
Chosen Option : 2

Q.11 In a  $\triangle ABC$ , if  $\angle A = 90^\circ$ ,  $AC = 5$  cm,  $BC = 9$  cm and in  $\triangle PQR$ ,  $\angle P = 90^\circ$ ,  $PR = 3$  cm,  $QR = 8$  cm, then:

- Ans
- 1.  $\triangle ABC \cong \triangle PQR$
  - 2.  $\triangle ABC \not\cong \triangle PQR$
  - 3.  $\triangle ABC \neq \triangle PQR$
  - 4.  $\triangle ABC = \triangle PQR$

Question ID : 264330126216  
Status : Answered  
Chosen Option : 2

Q.12 The following diagram shows the rainfall over two years. Which of the following months shows the highest percentage change in rainfall?



- Ans
- 1. January
  - 2. September
  - 3. May
  - 4. March

Question ID : 264330130030  
Status : Answered  
Chosen Option : 3

Q.13 If  $p = \frac{\sqrt{2}+1}{\sqrt{2}-1}$  and  $q = \frac{\sqrt{2}-1}{\sqrt{2}+1}$  then find the value of  $\frac{p^2}{q} + \frac{q^2}{p}$ .

- Ans
- 1. 200
  - 2. 196
  - 3. 198
  - 4. 188

Question ID : 26433080389  
Status : Answered  
Chosen Option : 3

Q.14 Find the exact value of  $\cos 120^\circ$ .

- Ans
- 1. -0.5
  - 2. 0
  - 3. 0.5
  - 4. 1

Question ID : 264330143579  
Status : Answered  
Chosen Option : 1

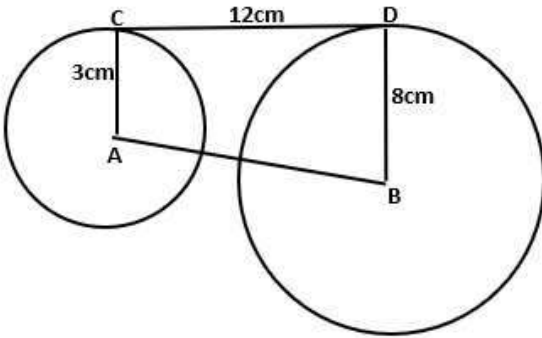
Q.15 A cone and a cylinder with equal radii have equal volumes. The ratio of their heights is :

- Ans
- 1. 2 : 3
  - 2. 3 : 4
  - 3. 1 : 2
  - 4. 3 : 1

Question ID : 26433081747  
Status : Answered  
Chosen Option : 4

**JOB SEEKER**  
NOT USELESS IT'S USED LESS

Q.16 Observe the given figure. The distance between the two centers AB is



- Ans
- 1. 10 cm
  - 2. 11 cm
  - 3. 13 cm
  - 4. 12 cm

Question ID : 264330106650

Status : Answered

Chosen Option : 3

Q.17 Quantity of various food items used by a restaurant during 4 months of a year (in kg).

Month \ Food Item	March	April	May	June
A	220	180	270	320
B	255	320	390	420
C	280	295	280	315
D	350	310	250	280
E	308	340	350	365

What is the average quantity of food item C used during all the 4 months together?

- Ans
- 1. 303.7 kg
  - 2. 292.5 kg
  - 3. 211.8 kg
  - 4. 253.6 kg

Question ID : 26433099056

Status : Answered

Chosen Option : 2

Q.18 Find the fourth proportional of 144, 192 and 216.

- Ans
- 1. 361
  - 2. 288
  - 3. 324
  - 4. 289

Question ID : 264330103412

Status : Answered

Chosen Option : 2

Q.19 Simplify the following expression.

$$\frac{7}{10} \div \frac{3}{7} \text{ of } \left(2\frac{3}{10} + 2\frac{3}{5}\right) + \frac{1}{5} \div 1\frac{2}{5} - \frac{2}{7}$$

- Ans
- 1.  $-\frac{4}{21}$
  - 2.  $\frac{5}{21}$
  - 3.  $\frac{4}{21}$
  - 4.  $-\frac{5}{21}$

Question ID : 264330143486

Status : Answered

Chosen Option : 3

Q.20 Using  $\tan(A - B) = \frac{\tan A - \tan B}{1 + \tan A \tan B}$ , find the value of  $\tan 15^\circ$ .

- Ans
- 1.  $\sqrt{3} + 1$
  - 2.  $\sqrt{3} - 1$
  - 3.  $2 - \sqrt{3}$
  - 4.  $2 + \sqrt{3}$

Question ID : 264330143531

Status : Answered

Chosen Option : 3

Q.21 Suresh and Anil are working on a special project. Suresh takes 5 hours to type 40 pages and Anil needs 6 hours to type 32 pages on a computer. How much time will it take them to type a 110-page assignment if they work on two different computers?

- Ans
- 1. 8 hours 15 minutes
  - 2. 8 hours
  - 3. 7 hours 35 minutes
  - 4. 8 hours 40 minutes

Question ID : 264330143468

Status : Answered

Chosen Option : 1



Q.22 A thief is spotted by a policeman from a distance of 210 m. When the policeman starts the chase, the thief also starts running. If the speed of the thief is 25 km/h and that of the policeman is 32 km/h, then how far would the thief have run (in m) before he is overtaken?

- Ans
- 1. 920
  - 2. 480
  - 3. 1200
  - 4. 750

Question ID : 264330102370  
Status : Answered  
Chosen Option : 4

Q.23 Sudhin cycled at 8.5 km/h for 4 hours, then took an auto and travelled at 20 km/h for 1.5 hours, and then walked at 4 km/h for y hours. If Sudhin's overall average speed for the entire journey was 10 km/h, what is the value of y?

- Ans
- 1. 2
  - 2. 1.25
  - 3. 1.5
  - 4. 1.75

Question ID : 264330103241  
Status : Answered  
Chosen Option : 3

Q.24 Area of a sector is  $1848 \text{ m}^2$  and the central angle of the sector is  $270^\circ$ . Find the radius of the circle. (Take  $\pi=22/7$ )

- Ans
- 1. 784 m
  - 2. 22 m
  - 3. 27 m
  - 4. 28 m

Question ID : 264330143591  
Status : Answered  
Chosen Option : 4

Q.25 A man and a woman can finish a work together in half the time taken by a woman and a boy together. A boy can finish the work alone in 20 days and 2 women together can finish it in 30 days. In how many days will the work be finished by 4 men?

- Ans
- 1. 2
  - 2. 2.14
  - 3. 2.5
  - 4. 3

Question ID : 264330117932  
Status : Answered  
Chosen Option : 3

Q.1 Select the most appropriate meaning of the underlined idiom.

Has he lost his mind? He is falling foul of everybody.

- Ans
- 1. Quite puzzled with
  - 2. Maintaining a sort of coldness
  - 3. Having an amicable talk with
  - 4. Quarrelling with

Question ID : 26433089102  
Status : Answered  
Chosen Option : 4

Q.2 Select the most appropriate synonym of the underlined word.

In the 2030 Agenda for Sustainable Development, Member States express their commitment to protect the planet from degradation and take urgent action on climate change.

- Ans
- 1. pollution
  - 2. hazard
  - 3. degeneration
  - 4. approval

Question ID : 26433090778  
Status : Answered  
Chosen Option : 1

Q.3 The following sentence has been split into four segments. Identify the segment that contains a grammatical error.

My mother said / that Ben will done / the assignment / today.

- Ans
- 1. today
  - 2. My mother said
  - 3. that Ben will done
  - 4. the assignment

Question ID : 26433086448  
Status : Answered  
Chosen Option : 2

Q.4 Select the most appropriate option that can substitute the underlined segment in the given sentence.

Irene went to office every single day by walk.

- Ans
- 1. every day single by walk
  - 2. every single day walk
  - 3. every single day on foot
  - 4. every single day on walk

Question ID : 26433088746  
Status : Answered  
Chosen Option : 3

**Q.5** Select the most appropriate one-word substitution of the given group of words.

Something that is absolutely necessary, that you cannot do without.

- Ans  1. Insular  
 2. Indispensable  
 3. Isolated  
 4. Intolerant

Question ID : 26433090859  
Status : Answered  
Chosen Option : 2

**Q.6** The following sentence has been divided into parts. One of them may contain an error. Select the part that contains the error from the given options. If you don't find any error, mark 'No error' as your answer.

Mr. Ram Kumar, the cashier are / on temporary withdrawal / from service.

- Ans  1. on temporary withdrawal  
 2. Mr. Ram Kumar, the cashier are  
 3. from service  
 4. No error

Question ID : 26433060152  
Status : Answered  
Chosen Option : 2

**Q.7** The given sentence has some words with incorrect spellings. Select the most appropriate option that corrects the spellings.

The agreement was terminated by mutal consent.

- Ans  1. The agreement was terminated by mutual consent.  
 2. The agreement was tarminated by mutual consent.  
 3. The agriment was terminated by mutual consent.  
 4. The agreement was terminated by mutual concent.

Question ID : 26433092087  
Status : Answered  
Chosen Option : 1

**Q.8** Select the option that can be used as a one-word substitute for the given group of words.

Animal living both on land and water.

- Ans  1. Marine  
 2. Amphibian  
 3. Arboreal  
 4. Terrestrial

Question ID : 26433084673  
Status : Answered  
Chosen Option : 2

**Q.9 Select the INCORRECTLY spelt word.**

- Ans  1. Avarise  
 2. Adverse  
 3. Beige  
 4. Admonish

Question ID : 264330120768  
Status : Answered  
Chosen Option : 1

**Q.10 Select the most appropriate option that can substitute the underlined segment in the given sentence. If there is no need to substitute it, select 'No substitution'.  
The company decided to sell their stake in their subsidiary because it was under massive debts.**

- Ans  1. sell their stake in its subsidiary  
 2. No substitution  
 3. sell its stake in their subsidiary  
 4. sell its stake in its subsidiary

Question ID : 26433093086  
Status : Answered  
Chosen Option : 4

**Q.11 Select the most appropriate option that can substitute the underlined segment in the given sentence.  
In times of difficulty, she preys for an oracle to guide her.**

- Ans  1. pray  
 2. praise  
 3. price  
 4. prays

Question ID : 264330117207  
Status : Answered  
Chosen Option : 4

**Q.12 Select the option that expresses the given sentence in passive voice.  
Rahul knows Shahbaz since childhood.**

- Ans  1. Shahbaz was known to Rahul since childhood.  
 2. Shahbaz is known to Rahul since childhood.  
 3. Shahbaz known by Rahul since childhood.  
 4. Shahbaz has known Rahul since childhood.

Question ID : 264330100323  
Status : Answered  
Chosen Option : 2

Q.13 Select the most appropriate ANTONYM of the underlined word.

The love between them is blooming.

- Ans
- 1. Flourishing
  - 2. Sprouting
  - 3. Growing
  - 4. Fading

Question ID : 26433090864  
Status : Answered  
Chosen Option : 4

Q.14 Select the most appropriate ANTONYM of the underlined word.

The truck was carrying a heavy load .

- Ans
- 1. Big
  - 2. Massive
  - 3. Light
  - 4. Large

Question ID : 264330121042  
Status : Answered  
Chosen Option : 3

Q.15 Select the most appropriate meaning of the given idiom.

To be in two minds

- Ans
- 1. To be dominated by someone else
  - 2. To work on somebody else's advice
  - 3. To be in a critical state
  - 4. To be uncertain

Question ID : 26433088139  
Status : Answered  
Chosen Option : 4

Q.16 Sentences of a paragraph are given below in jumbled order. Arrange the sentences in the correct order to form a meaningful and coherent paragraph.

- A.The shopman was very interested in selling this creamy box to her as he would gain a big margin.
- B.The man on the counter showed her 'an exquisite little enamel box' with a very fine glaze as if baked in cream.
- C.As the box was too expensive, priced twenty-eight guineas, she asked the shopkeeper to keep it for her.
- D.She went inside a little antique shop in Curzon Street. This was the usual shop where the shopkeeper was ridiculously fond of serving her.

- Ans
- 1. DCBA
  - 2. ADBC
  - 3. BDAC
  - 4. DBAC

Question ID : 26433096941  
Status : Answered  
Chosen Option : 4

Q.17 Select the most appropriate ANTONYM of the underlined word.

I understand your plight.

- Ans
- 1. Predicament
  - 2. Dilemma
  - 3. Quandary
  - 4. Advantage

Question ID : 26433090862  
Status : Answered  
Chosen Option : 4

Q.18 Select the most appropriate synonym of the given word.

Certain

- Ans
- 1. Approval
  - 2. Definite
  - 3. Doubtful
  - 4. Caution

Question ID : 26433093487  
Status : Answered  
Chosen Option : 2

Q.19 Select the most appropriate option that can substitute the underlined segment in the given sentence. If there is no need to substitute it, select 'No substitution'.

The Karaoke programme was planned by the club was a grand success.

- Ans
- 1. were planned by the club
  - 2. No substitution
  - 3. has been planned by the club
  - 4. planned by the club

Question ID : 26433073943  
Status : Answered  
Chosen Option : 4

Q.20 Select the option that expresses the given sentence in passive voice.  
They will not water the plants.

- Ans
- 1. The plants will not be watered by them.
  - 2. The plants will not be watered by us.
  - 3. The plants are not be watered by them.
  - 4. They shall not water the plants.

Question ID : 264330121857  
Status : Answered  
Chosen Option : 1

**Comprehension:**

In the following passage, some words have been deleted. Read the passage carefully and select the most appropriate option to fill in each blank.

War is mostly glorified and (1) \_\_\_\_\_ by society. The real picture of warfare is as horrific and (2) \_\_\_\_\_ as one can imagine. Often, soldiers who witness death-like experiences suffer from psychological disorders and are (3) \_\_\_\_\_ for the rest of their lives. Many war poems contrast all the sentimental myths about warfare by (4) \_\_\_\_\_ the harsh realities that soldiers face. The real trauma is seen in people who are left to (5) \_\_\_\_\_ for their loved ones after they are gone.

**SubQuestion No : 21**

**Q.21 Select the most appropriate option to fill in blank number 1.**

- Ans  1. sharpened  
 2. cemented  
 3. sacrificed  
 4. eulogised

Question ID : 264330139103  
Status : Answered  
Chosen Option : 4

**Comprehension:**

In the following passage, some words have been deleted. Read the passage carefully and select the most appropriate option to fill in each blank.

War is mostly glorified and (1) \_\_\_\_\_ by society. The real picture of warfare is as horrific and (2) \_\_\_\_\_ as one can imagine. Often, soldiers who witness death-like experiences suffer from psychological disorders and are (3) \_\_\_\_\_ for the rest of their lives. Many war poems contrast all the sentimental myths about warfare by (4) \_\_\_\_\_ the harsh realities that soldiers face. The real trauma is seen in people who are left to (5) \_\_\_\_\_ for their loved ones after they are gone.

**SubQuestion No : 22**

**Q.22 Select the most appropriate option to fill in blank number 2.**

- Ans  1. lengthening  
 2. inspiring  
 3. devastating  
 4. harkening

Question ID : 264330139104  
Status : Answered  
Chosen Option : 3

**Comprehension:**

In the following passage, some words have been deleted. Read the passage carefully and select the most appropriate option to fill in each blank.

War is mostly glorified and (1) \_\_\_\_\_ by society. The real picture of warfare is as horrific and (2) \_\_\_\_\_ as one can imagine. Often, soldiers who witness death-like experiences suffer from psychological disorders and are (3) \_\_\_\_\_ for the rest of their lives. Many war poems contrast all the sentimental myths about warfare by (4) \_\_\_\_\_ the harsh realities that soldiers face. The real trauma is seen in people who are left to (5) \_\_\_\_\_ for their loved ones after they are gone.

**SubQuestion No : 23**

**Q.23 Select the most appropriate option to fill in blank number 3.**

- Ans
- 1. creeped
  - 2. shelled
  - 3. numbed
  - 4. hardened

Question ID : 264330139105

Status : Answered

Chosen Option : 1

**Comprehension:**

In the following passage, some words have been deleted. Read the passage carefully and select the most appropriate option to fill in each blank.

War is mostly glorified and (1) \_\_\_\_\_ by society. The real picture of warfare is as horrific and (2) \_\_\_\_\_ as one can imagine. Often, soldiers who witness death-like experiences suffer from psychological disorders and are (3) \_\_\_\_\_ for the rest of their lives. Many war poems contrast all the sentimental myths about warfare by (4) \_\_\_\_\_ the harsh realities that soldiers face. The real trauma is seen in people who are left to (5) \_\_\_\_\_ for their loved ones after they are gone.

**SubQuestion No : 24**

**Q.24 Select the most appropriate option to fill in blank number 4.**

- Ans
- 1. exposing
  - 2. hardening
  - 3. giving
  - 4. being

Question ID : 264330139106

Status : Answered

Chosen Option : 1



**Comprehension:**

In the following passage, some words have been deleted. Read the passage carefully and select the most appropriate option to fill in each blank.

War is mostly glorified and (1) \_\_\_\_\_ by society. The real picture of warfare is as horrific and (2) \_\_\_\_\_ as one can imagine. Often, soldiers who witness death-like experiences suffer from psychological disorders and are (3) \_\_\_\_\_ for the rest of their lives. Many war poems contrast all the sentimental myths about warfare by (4) \_\_\_\_\_ the harsh realities that soldiers face. The real trauma is seen in people who are left to (5) \_\_\_\_\_ for their loved ones after they are gone.

**SubQuestion No : 25**

**Q.25 Select the most appropriate option to fill in blank number 5.**

- Ans  1. think  
 2. memorise  
 3. mourn  
 4. resist

Question ID : 264330139107

Status : Answered

Chosen Option : 3



## Combined Graduate level Examination 2023 Tier I

Roll Number	
Candidate Name	
Venue Name	Dewa Mahila Mahavidyalaya
Exam Date	19/07/2023
Exam Time	9:00 AM - 10:00 AM
Subject	Combined Graduate Level Examination Tier I 2023

Section : General Intelligence and Reasoning

**Q.1** Select the option that represents the correct order of the given words as they would appear in an English dictionary.

1. Variance
2. Violence
3. Vanquish
4. Vampire
5. Valiant
6. Victorious

- Ans  1. 4, 5, 3, 1, 2, 6  
 2. 5, 3, 4, 1, 6, 2  
 3. 5, 4, 3, 1, 6, 2  
 4. 4, 3, 5, 2, 1, 6

Question ID : 264330129466

Status : Answered

Chosen Option : 3

**Q.2** Which two signs should be interchanged to make the given equation correct?

$$756 \div 252 + 89 \times 180 - 63 = 384$$

- Ans  1. + and ×  
 2. ÷ and -  
 3. - and +  
 4. ÷ and +

Question ID : 264330132504

Status : Answered

Chosen Option : 1

**Q.3** Select the option that represents the letters that, when sequentially placed from left to right in the blanks below, will complete the letter series.

AESO\_WDAE\_\_MWDA\_SOM\_D\_ESOMW\_

- Ans  1. MOSEDAW  
 2. MSOEDAW  
 3. MOESWAD  
 4. MSOEWAD

Question ID : 264330131037

Status : Answered

Chosen Option : 4