

# Constable GD in Central Armed Police Forces CAPFs SSF Rifleman GD in Assam Rifles Examination 2024

Exam Date	20/02/2024
Exam Time	9:00 AM - 10:00 AM
Subject	Constable GD Examination 2024

## Section : Part-A-General Intelligence and Reasoning

**Q.1** Arrange the given words in the sequence in which they occur in the dictionary.

1. Dear
2. Dean
3. Deal
4. Dead
5. Death

- Ans**
- 1. 43251
  - 2. 43215
  - 3. 13245
  - 4. 13254


**Q.2** Eight boys B1, B2, B3, B4, B5, B6, B7 and B8 are sitting in a row facing towards the north (not necessarily in the same order). B6 is fifth to the right of B1. B4 is fifth to the right of B5. B5 is to the immediate right of B1. B8 is third to the left of B4. B2 is third to the right of B7. B7 is an immediate neighbour of B1. Who is sitting on the immediate left of B1?

- Ans**
- 1. B6
  - 2. B7
  - 3. B2
  - 4. B8

**Q.3** Select the option that is related to the third word in the same way as the second word is related to the first word.  
Bicycle : Pedal :: Car : ?

- Ans**
- 1. Shovel
  - 2. Door
  - 3. Hammer
  - 4. Wheel

Q.4 In the following question, select the figure which can be placed at the sign of question mark (?) from the given alternatives.



Ans

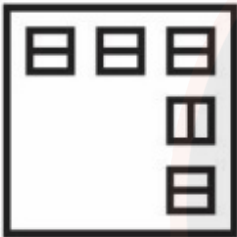
✗ 1.



✓ 2.



✗ 3.



✗ 4.



JOB SEEKER  
NOT USELESS IT'S USED LESS

Q.5 Five friends Alex, Ben, Chris, David, and Emma are sitting around a circular table facing the center. Alex sits to the immediate right of Ben. Alex is not sitting next to Chris or David. David is to the immediate right of Emma. Who is sitting to the immediate right of Chris?

Ans ✗ 1. Emma

✓ 2. Ben

✗ 3. Alex

✗ 4. David

Q.6 Which two signs should be interchanged to make the given equation correct?

$$28 + 12 - 21 \div 7 \times 4 = 60$$

Ans ✓ 1.  $\times$  and  $-$

✗ 2.  $+$  and  $\div$

✗ 3.  $\times$  and  $\div$

✗ 4.  $\times$  and  $+$

**Q.7** Three Statements are given followed by two conclusions numbered I and II. Assuming the statements to be true, even if they seem to be at variance with commonly known facts, decide which of the conclusions logically follow(s) from the statements.

Statement I: All bats are balls.

Statement II: All balls are badmintons.

Statement III: All badmintons are wickets.

Conclusion I: All bats are wickets.

Conclusion II: Some badmintons are bats.

- Ans**
- 1. Neither conclusion I nor II follows
  - 2. Both conclusions I and II follow
  - 3. Only conclusion II follows
  - 4. Only conclusion I follows

**Q.8** In the following question, select the missing number from the given series.

142, 150, 123, 187, 62, ?

- Ans**
- 1. 300
  - 2. 285
  - 3. 281
  - 4. 278

**Q.9** In the following question, select the related letter pair from the given alternatives.

KW : FR :: ?

- Ans**
- 1. OC : CP
  - 2. AB : BM
  - 3. BM : WO
  - 4. IU : DP

**Q.10** 'I × J' means 'I is the mother of J'

'I + J' means 'I is the husband of J'

'I ÷ J' means 'I is the sister of J'

'I - J' means 'I is the brother of J'

How is Q related to Z in the expression 'Q ÷ X + Y × Z'?

- Ans**
- 1. Father's sister
  - 2. Wife's sister
  - 3. Daughter
  - 4. Wife

Q.11 Which of the following letter-number cluster will replace the question mark (?) in the given series?

TJM10, ULP12, VNS14, WPV16, XRY18, ?

- Ans
- 1. YTB21
  - 2. YSZ21
  - 3. YTB20
  - 4. YSZ20

Q.12 From the given option figures, select the one in which the question figure is hidden/embedded. (rotation is not allowed)



Ans

1.



2.



3.



4.



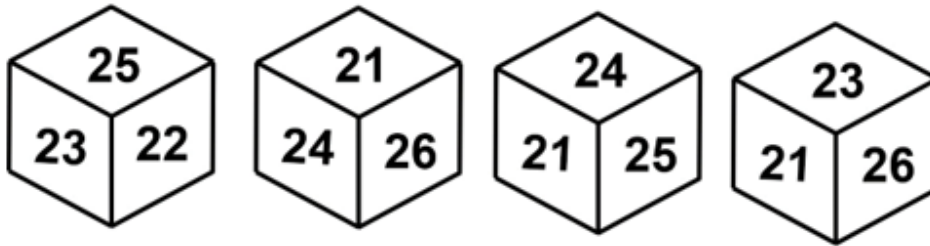
Q.13 In a certain code language, 'LAMP' is coded as 'IWJL'. What is the code for 'LOGS' in that code language?

- Ans
- 1. IKDP
  - 2. IJDO
  - 3. IKEO
  - 4. IKDO

Q.14 In a certain code language, 'FORCE' is coded as '83052', 'GAMES' is coded as '42761', 'FORUM' is coded as '08957'. What is the code for 'C' in that code language?

- Ans
- 1. 5
  - 2. 2
  - 3. 8
  - 4. 3

Q.15 Four different positions of the same dice are given below. Find the number opposite of 23.



- Ans
- 1. 21
  - 2. 25
  - 3. 26
  - 4. 24

Q.16 Which of the following groups of letters when sequentially placed from left to right will complete the given series?

jklmnoijklmnoj\_lmnojk\_m\_ojklmn\_

- Ans
- 1. jklm
  - 2. klno
  - 3. knlo
  - 4. mnol

Q.17 Which of the following numbers will replace the question mark (?) in the given series?

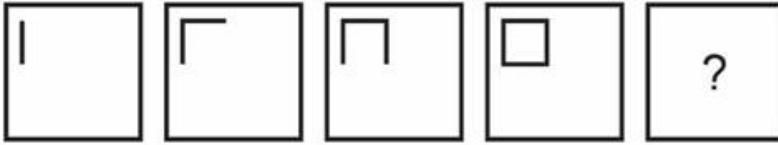
8, 18, 38, 78, 158, ?

- Ans
- 1. 318
  - 2. 340
  - 3. 290
  - 4. 268

JOB SEEKER

NOT USELESS IT'S USED LESS

Q.18 In the following question, select the figure which can be placed at the sign of question mark (?) from the given alternatives.



Ans

✓ 1.



✗ 2.



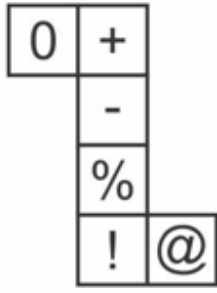
✗ 3.



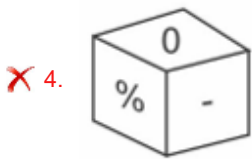
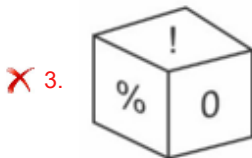
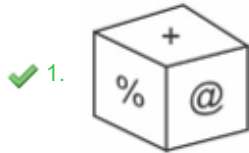
✗ 4.



Q.19 Select the cube which cannot be formed on folding the given sheet.



Ans



Q.20 Which two numbers should be interchanged to make the given equation correct?

$$8 \times 9 \div 4 + 5 - 3 = 2$$

Ans ✗ 1. 8 and 4

✗ 2. 2 and 5

✓ 3. 3 and 9

✗ 4. 9 and 2

Section : Part-B-General Knowledge and General awareness

Q.1 Which Indian musician is the first singer to get the highest civilian honour, the Bharat Ratna?

Ans ✗ 1. Zakir Hussain

✗ 2. A.R. Rahman

✓ 3. M.S. Subbulakshmi

✗ 4. R.D. Burman

Q.2 Which Indian dancer won the Sangeet Natak Akademi Award for Odissi Dance in 2018?

- Ans
- 1. Dr. Aruna Mohanty
  - 2. Akham Lakshmi Devi
  - 3. Surupa Sen
  - 4. Elam Endira Devi

Q.3 According to part IVA of Indian Constitution," who is a parent or guardian, has a duty to provide opportunities for education to his child or, as the case may be, ward between the age of \_\_\_\_\_."

- Ans
- 1. 2-6
  - 2. 6-14
  - 3. 6-12
  - 4. 4-14

Q.4 What is the name of the earliest form of writing known in the Indian subcontinent?

- Ans
- 1. Pali Script
  - 2. Indus Script
  - 3. Brahmi Script
  - 4. Sanskrit Script

Q.5 According to the Women's Reservation Bill, 2023, how many seats in the Lok Sabha and state legislative assemblies are reserved for women?

- Ans
- 1. Two-thirds
  - 2. One-third
  - 3. One-fourth
  - 4. Half

Q.6 Pandit Birju Maharaj was an Indian dancer, composer, singer, and exponent of the \_\_\_\_\_ "Kalka-Bindadin" Gharana of Kathak dance in India.

- Ans
- 1. Lucknow
  - 2. Hyderabad
  - 3. Agra
  - 4. Gwalior

Q.7 The IAAF World Championships in Athletics became a fully professional competition from \_\_\_\_\_.

- Ans
- 1. 1997
  - 2. 1995
  - 3. 1993
  - 4. 1991



Q.8 Which institution was established in 2015, in the place of Planning commission of India?

- Ans
- 1. NABARD
  - 2. NITI Aayog
  - 3. RBI
  - 4. SEBI

Q.9 Barash is similar to the hindu festival Diwali, which is celebrated by which of following tribes?

- Ans
- 1. Varli and Kokna
  - 2. Santhal
  - 3. Munda
  - 4. Gond and Bhil

Q.10 Rangaswami Cup is associated with sports \_\_\_\_\_.

- Ans
- 1. Football
  - 2. Hockey
  - 3. Tennis
  - 4. Badminton

Q.11 Open Network for Digital Commerce (ONDC) is an initiative by \_\_\_\_\_.

- Ans
- 1. Ministry of Statistics and Program Implementation
  - 2. Ministry of Information and Broadcasting
  - 3. Department for Promotion of Industry and Internal Trade
  - 4. NITI Aayog

Q.12 \_\_\_\_\_ is the most commonly used measure of money supply.

- Ans
- 1. M1
  - 2. M2
  - 3. M4
  - 4. M3

Q.13 The First Economic Census of India was conducted throughout the country, except Lakshadweep, during \_\_\_\_\_ in collaboration with the States/Union Territories (UTs).

- Ans
- 1. 1977
  - 2. 1997
  - 3. 1967
  - 4. 1987

Q.14 Who was the founder of the Satyashodhak Samaj?

- Ans
- 1. Ghasidas
  - 2. Haridas Thakur
  - 3. Jyotirao Phule
  - 4. Ishwarchandra Vidyasagar

Q.15 Who joined the Competition Commission of India (CCI) as Chairperson on 23rd May, 2023?

- Ans
- 1. Shanti Ekambaram
  - 2. Ravneet Kaur
  - 3. Leena Nair
  - 4. Naina Lal Kidwai

Q.16 When Mendeleev started his work, how many elements were known at that time?

- Ans
- 1. 36
  - 2. 29
  - 3. 63
  - 4. 47

Q.17 Complete the statement given below with respect to the judge's removal.

The Indian Constitution :-

- Ans
- 1. prescribes a procedure for removal of high court judges only.
  - 2. prescribes a very difficult procedure for removal of judges.
  - 3. does not prescribe a procedure for removal of judges.
  - 4. prescribes a very flexible procedure for removal of judges.

Q.18 Which of the following statements is correct regarding badminton?

I. At the beginning of the game of badminton and when the score is even, the server serves from the left service court.

II. Server and receiver always stand in opposite service courts but on the same side.

- Ans
- 1. Only I
  - 2. Both I and II
  - 3. Only II
  - 4. Neither I nor II

Q.19 Which State's Chief Minister has been awarded the Bharat Ratna Dr Ambedkar Award for fear free state, in May 2023?

- Ans
- 1. Chief Minister of UP
  - 2. Chief Minister of Jharkhand
  - 3. Chief Minister of Kerala
  - 4. Chief Minister of Bihar

Q.20 \_\_\_\_\_ is the total process of collecting, compiling, analyzing and disseminating demographic, economic and social data pertaining, at a specific time, of all persons in a country or a well-defined part of a country.

- Ans
- 1. Population
  - 2. National Survey
  - 3. Population Census
  - 4. Constitution

Q.1 What is the value of  $[41 \times \{36 \text{ of } 4 \div (96 \text{ of } 2 \div 24)\}]$ ?

- Ans
- 1. 656
  - 2. 697
  - 3. 738
  - 4. 779

Q.2 Rs. 7200 is divided among P, Q and R in the ratio of  $1/2 : 4 : 3/2$  respectively. What is the share of R?

- Ans
- 1. Rs. 2400
  - 2. Rs. 4800
  - 3. Rs. 600
  - 4. Rs. 1800

Q.3 Rohit buys an old bat for Rs. 2320 and spends Rs. 180 on its repairing. If he sells it for Rs. 2400, then what is the loss percentage?

- Ans
- 1. 8 percent
  - 2. 5 percent
  - 3. 4 percent
  - 4. 10 percent

Q.4 If the length of a rectangle is increased by 14.28 percent, then by how much percentage its breadth should be reduced to keep the area same?

- Ans
- 1. 12.5 percent
  - 2. 14.28 percent
  - 3. 14 percent
  - 4. 16.66 percent

Q.5 There are 44 mangoes, 121 bananas and 11 apples, they have to be arranged in several rows in such a way that every row contains equal number of fruits and each row contains fruit of one type. What is the minimum number of rows?

- Ans
- 1. 16
  - 2. 15
  - 3. 14
  - 4. 13

Q.6 A sum of money placed at compound interest (compounding annually) doubles itself in 10 years. Find the time in which it will amount to 4 times itself.

- Ans
- 1. 20 years
  - 2. 14 years
  - 3. 10 years
  - 4. 15 years

JOB SEEKER  
NOT USELESS IT'S USED LESS

Q.7 A student scores 75% in a test and gets 30 marks more than another student who scored 60%. What is the maximum marks in the test?

- Ans
- 1. 120
  - 2. 150
  - 3. 100
  - 4. 200

Q.8 Evaluate:

$$\{(175 \times 72 \div 24 + 5) \times 20\} \div 2$$

- Ans
- 1. 5800
  - 2. 4850
  - 3. 4300
  - 4. 5300

Q.9 After working for 8 days, Rakhi finds that only 10 percent of the work is completed. She employs Poonam who is 20 percent more efficient than Rakhi. How many more days will they together take to complete the remaining work?

- Ans
- 1. 360/7 days
  - 2. 360/11 days
  - 3. 340/11 days
  - 4. 340/7 days

Q.10 Selling price of an article is Rs. 5175 and discount of 25 percent is offered. What is the marked price of the article?

- Ans
- 1. Rs. 6900
  - 2. Rs. 8500
  - 3. Rs. 6600
  - 4. Rs. 7000

Q.11 R can do a work in 90 days. What percent work of the total work can be done by R in 45 days?

- Ans
- 1. 70 percent
  - 2. 50 percent
  - 3. 56 percent
  - 4. 65 percent

Q.12 Find the value of  $(7 + 33) \times (44 \div 2) \times (5 \times 5)$ .

- Ans
- 1. 25,000
  - 2. 21,000
  - 3. 22,000
  - 4. 22,500

Q.13 In an exam, out of total number of appeared students 93 percent students passed and 9275 students failed. What is the total number of students appeared in the exam?

- Ans
- 1. 132550
  - 2. 132500
  - 3. 135550
  - 4. 135500

Q.14 In one year, the average monthly expenditure of Sapna was Rs. 1100 for the first 3 months of the year, Rs. 1000 for the next 5 months and Rs. 1200 for the last 4 months. If the total annual saving was Rs. 1300, then what was sapna's average monthly income?

- Ans
- 1. Rs. 1250
  - 2. Rs. 1270
  - 3. Rs. 1210
  - 4. Rs. 1200

Q.15 The simple interest received on a sum for 40 years is  $\frac{2}{5}$  of the sum. What is the annual rate of interest?

- Ans
- 1. 1.5 percent
  - 2. 1 percent
  - 3. 2 percent
  - 4. 3 percent

Q.16 Both A and B sells their watch at the rate of Rs. 5000 per watch. A earned a profit of 25 percent while B incurred a loss of 10 percent. What is the ratio of cost prices of A and B?

- Ans
- 1. 18 : 25
  - 2. 17 : 20
  - 3. 16 : 25
  - 4. 9 : 10

Q.17 Two trains are running in opposite direction with the same speed. If the length of each train is 320 metres and they cross each other in 18 seconds, then what is the speed of each train?

- Ans
- 1. 48 km/hr
  - 2. 64 km/hr
  - 3. 72 km/hr
  - 4. 56 km/hr

Q.18 The ages of 7 men in a cricket team are 26, 25, 21, 29, 24, 28 and 22. What is their average age?

- Ans
- 1. 24
  - 2. 22
  - 3. 25
  - 4. 23



Q.19 If  $M : N = 9 : 6$ , then what is the value of  $(M + N) : (M - N)$ ?

- Ans
- 1. 5 : 1
  - 2. 1 : 5
  - 3. 5 : 4
  - 4. 5 : 2

Q.20 Marked price of a chair is Rs. 2000. After giving two successive discounts of 20 percent and x percent, the chair is sold for Rs. 1400. What is the value of x?

- Ans
- 1. 25 percent
  - 2. 10 percent
  - 3. 20 percent
  - 4. 12.5 percent

Section : Part-D-English

Q.1 Select the sentence with no spelling errors.

- Ans
- 1. I had to play melody while simultaneously playing harmony with him.
  - 2. I had to play melody while simultaneously playing harmuny with him.
  - 3. I had to play melodie while simultaneously playing harmony with him.
  - 4. I had to play melody while simultanously playing harmony with him.

Q.2 Choose the idiom/phrase that can substitute the highlighted group of words meaningfully.

He often **changes plans** while doing his work. So, his tasks remain incomplete.

- Ans
- 1. In seventh heaven
  - 2. Change horses in midstream
  - 3. Break a leg
  - 4. Spill the beans

Q.3 The sentence has been divided into three parts, identify the error segment in the sentence given below. Choose no error if there is no error in the sentence.

She is not as taller as her/ older brother, but she is/ equally skilled in basketball.

- Ans
- 1. She is not as taller as her
  - 2. equally skilled in basketball.
  - 3. older brother, but she is
  - 4. no error

Q.4 Four words are given, out of which only one word is spelt correct. Choose the correct spelt word.

- Ans
- 1. SUCCESFUL
  - 2. RELEVANT
  - 3. SUPRISE
  - 4. WITHHOLD

Q.5 Four sentences are given, out of which three have all correct spellings. Choose the sentence with the incorrect spelt word/ words.

Ans  1.

I slipped the ramrod down it to make sure it was loaded, then I laid it across the turnip barrel, pointing towards pap.

2.

But the hope in his wisdom was at length changed into dred, for no one beleived him when he said he knew no charms.

3. That made me pretty uneasy again, but only for a minute.

4.

He said he would watch out, and if they tried to come any such game on him he knew of a place six or seven mile off to stow me in.

Q.6 Select the most appropriate option for the given blank.

My puns are usually greeted \_\_\_\_\_ loud applause by my friends.

Ans  1. against

2. to

3. for

4. with

Q.7 Improve the underlined part of the sentence. Choose 'No improvement' as an answer if the sentence is grammatically correct.

I meet an homeless person in New York.

Ans  1. met an homeless

2. will met a homeless

3. No improvement

4. met a homeless

Q.8 Choose the word that is opposite in meaning to the given word.

Antipathy

Ans  1. Lament

2. Hate

3. Love

4. Fecund

Q.9 Fill in the blank with the most appropriate option.

Her mother is a wonderful host, she prepared for us a seven \_\_\_\_\_ meal all by herself.

Ans  1. coarser

2. course

3. coarse

4. courser

Q.10 Select the most appropriate word to fill in the blank.

Mansa is not \_\_\_\_\_ than Mamta.

- Ans
- 1. tallest
  - 2. tall
  - 3. taller
  - 4. more taller

Q.11 From the options given below choose the synonym (similar meaning) of the word:

Enervate

- Ans
- 1. Insecure
  - 2. Desolation
  - 3. Devitalize
  - 4. Secure

Q.12 Improve the underlined part of the sentence. Choose 'No improvement' as an answer if the sentence is grammatically correct.

My aunt has a petted Rhode Island Red rooster.

- Ans
- 1. have a pet
  - 2. had a petting
  - 3. No improvement
  - 4. has a pet

Q.13 In the following question, out of the given four alternatives, select the alternative which best expresses the meaning of the Idiom/Phrase.

Have a good run

- Ans
- 1. To experience joy or success in some endeavour, but only for a limited period of time
  - 2. To escape from a prison
  - 3. A good amount of money
  - 4. A long journey

Q.14 Identify the segment that contains a grammatical error. If there is no error, select 'No error'.

And thereupon he sudden remembered / that he was not sleeping in his wife's room, but in his study, / and the smile vanished from his face.

- Ans
- 1. and the smile vanished from his face.
  - 2. And thereupon he sudden remembered
  - 3. that he was not sleeping in his wife's room, but in his study,
  - 4. No error



**Q.15** Find the part of the given sentence that has an error in it. If there is no error, choose 'No error'.  
The health agency has encourage people around the world to wash their hands regularly.

- Ans**
- 1. The health agency has encourage
  - 2. No error
  - 3. people around the world to
  - 4. wash their hands regularly.

**Comprehension:**

Read the passage carefully and select the correct answer for the given blanks out of the four alternatives.

The causes of bipolar disorder aren't completely understood, but it often (1)\_\_\_\_\_ to be hereditary. The first manic or depressive episode of bipolar disorder usually (2)\_\_\_\_\_ in the teenage years or early adulthood. The symptoms can be subtle and confusing; many people with bipolar disorder are overlooked or misdiagnosed—resulting in unnecessary (3)\_\_\_\_\_. Since bipolar disorder tends to worsen without treatment, it's important to learn (4)\_\_\_\_\_ the symptoms look like. Recognizing the problem is the first step to feeling better and getting your life back on (5)\_\_\_\_\_.

**SubQuestion No : 16**

**Q.16** Select the most appropriate option for blank(1)

- Ans**
- 1. appears
  - 2. signs
  - 3. pings
  - 4. injects

**Comprehension:**

Read the passage carefully and select the correct answer for the given blanks out of the four alternatives.

The causes of bipolar disorder aren't completely understood, but it often (1)\_\_\_\_\_ to be hereditary. The first manic or depressive episode of bipolar disorder usually (2)\_\_\_\_\_ in the teenage years or early adulthood. The symptoms can be subtle and confusing; many people with bipolar disorder are overlooked or misdiagnosed—resulting in unnecessary (3)\_\_\_\_\_. Since bipolar disorder tends to worsen without treatment, it's important to learn (4)\_\_\_\_\_ the symptoms look like. Recognizing the problem is the first step to feeling better and getting your life back on (5)\_\_\_\_\_.

**SubQuestion No : 17**

**Q.17** Select the most appropriate option for blank(2)

- Ans**
- 1. differs
  - 2. dwindles
  - 3. occurs
  - 4. turns

**Comprehension:**

Read the passage carefully and select the correct answer for the given blanks out of the four alternatives.

The causes of bipolar disorder aren't completely understood, but it often (1)\_\_\_\_\_ to be hereditary. The first manic or depressive episode of bipolar disorder usually (2)\_\_\_\_\_ in the teenage years or early adulthood. The symptoms can be subtle and confusing; many people with bipolar disorder are overlooked or misdiagnosed—resulting in unnecessary (3)\_\_\_\_\_. Since bipolar disorder tends to worsen without treatment, it's important to learn (4)\_\_\_\_\_ the symptoms look like. Recognizing the problem is the first step to feeling better and getting your life back on (5)\_\_\_\_\_.

**SubQuestion No : 18**

**Q.18** Select the most appropriate option for blank(3)

- Ans**
- 1. blunder
  - 2. caressing
  - 3. suffering
  - 4. chaos

**Comprehension:**

Read the passage carefully and select the correct answer for the given blanks out of the four alternatives.

The causes of bipolar disorder aren't completely understood, but it often (1)\_\_\_\_\_ to be hereditary. The first manic or depressive episode of bipolar disorder usually (2)\_\_\_\_\_ in the teenage years or early adulthood. The symptoms can be subtle and confusing; many people with bipolar disorder are overlooked or misdiagnosed—resulting in unnecessary (3)\_\_\_\_\_. Since bipolar disorder tends to worsen without treatment, it's important to learn (4)\_\_\_\_\_ the symptoms look like. Recognizing the problem is the first step to feeling better and getting your life back on (5)\_\_\_\_\_.

**SubQuestion No : 19**

**Q.19** Select the most appropriate option for blank(4)

- Ans**
- 1. where
  - 2. what
  - 3. which
  - 4. why

**Comprehension:**

Read the passage carefully and select the correct answer for the given blanks out of the four alternatives.

The causes of bipolar disorder aren't completely understood, but it often (1)\_\_\_\_\_ to be hereditary. The first manic or depressive episode of bipolar disorder usually (2)\_\_\_\_\_ in the teenage years or early adulthood. The symptoms can be subtle and confusing; many people with bipolar disorder are overlooked or misdiagnosed—resulting in unnecessary (3)\_\_\_\_\_. Since bipolar disorder tends to worsen without treatment, it's important to learn (4)\_\_\_\_\_ the symptoms look like. Recognizing the problem is the first step to feeling better and getting your life back on (5)\_\_\_\_\_.

**SubQuestion No : 20**

**Q.20** Select the most appropriate option for blank(5)

- Ans**
- 1. time
  - 2. system
  - 3. platform
  - 4. track

Q.1 निम्नलिखित प्रश्न में, चार विकल्पों में से, उस विकल्प का चयन करें जो कोष्ठक में दिए गए शब्द के तत्सम रूप का सही विकल्प है।

मेरे पड़ोसी का घर बन रहा है इसलिए बहुत सी (ईंट) \_\_\_\_\_ मँगवाई गई है।

Ans  1. रेट

2. इष्टिका

3. गंडक

4. अक्ष

Q.2 निम्नलिखित प्रश्न में, चार विकल्पों में से, उस विकल्प का चयन करें जो रिक्त स्थान के लिए सही पुल्लिंग रूप वाला विकल्प हो।

में \_\_\_\_\_ में अपने परिवार के साथ घूमने जाने वाली हूँ।

Ans  1. दिसंबर

2. गाड़ी

3. कल

4. अपनेपन

Q.3 दिए गए वाक्य में उचित पर्यायवाची शब्द का चयन करके रिक्त स्थान की पूर्ति करें।

पर्वत \_\_\_\_\_ (स्थिर) है।

Ans  1. सुगम

2. मंगल

3. गिरावट

4. निश्चल

Q.4 निम्नलिखित वाक्य में रेखांकित भाग के लिए एक सार्थक शब्द ज्ञात कीजिए।

पुस्तकालय में हाथ से लिखी एक भी पुस्तक उपलब्ध नहीं है।

Ans  1. छायाप्रति

2. प्रतिलिपि

3. पांडुलिपि

4. चित्रपुस्तक

Q.5 निम्नलिखित वाक्य में, उस वाक्यांश को पहचानिए जिसमें अशुद्धियाँ हैं। यदि कोई गलती नहीं है तो 'कोई त्रुटि नहीं है' का चुनाव कीजिए।

हर साल के विश्व पर्यावरण दिवस को कुछ न कुछ विषय के/ साथ मनाई जाती है, और यह विषय विशेष रूप से पर्यावरण पर/ किसी एक चिंता पर ध्यान आकर्षित करने के लिए होता है।

- Ans
- ✗ 1. किसी एक चिंता पर ध्यान आकर्षित करने के लिए होता है
  - ✓ 2. साथ मनाई जाती है, और यह विषय विशेष रूप से पर्यावरण पर
  - ✗ 3. कोई त्रुटि नहीं है
  - ✗ 4. हर साल के विश्व पर्यावरण दिवस को कुछ न कुछ विषय के

Q.6 दिए गए विकल्पों में से शुद्ध वर्तनी वाले विकल्प का चयन करें।

- Ans
- ✗ 1. यह मशिन सब कार्य करती है।
  - ✗ 2. राम की तूलना कबीर से मत करो।
  - ✓ 3. औरत में बहुत शक्ति होती है।
  - ✗ 4. दिपक रोशनी प्रदान करता है।

Q.7 दिए गए वाक्य में रेखांकित शब्द का विलोम शब्द ज्ञात कीजिए।

संसार नश्वर है।

- Ans
- ✗ 1. संपन्न
  - ✗ 2. दानव
  - ✓ 3. अनश्वर
  - ✗ 4. सहित

Q.8 दिए गए वाक्य में रेखांकित भाग के लिए उचित सार्थक शब्द का चयन कीजिए।

रात होते ही झभी बढ़ गई है।

- Ans
- ✗ 1. झाभ
  - ✓ 2. भीड़
  - ✗ 3. भाड़
  - ✗ 4. भड़ा

Q.9 निम्नलिखित प्रश्न में, चार विकल्पों में से, उस विकल्प का चयन करें जो रिक्त स्थान के लिए सही शब्द वाला विकल्प हो।

महाभारत में कहा गया है कि जो सब धर्मों को सम्मान नहीं देता, वह धर्म नहीं \_\_\_\_\_ है।

- Ans
- ✗ 1. आचार
  - ✗ 2. सधर्म
  - ✓ 3. अधर्म
  - ✗ 4. तपस्या

Q.10 दिए गए वाक्य में रेखांकित शब्द का विलोम शब्द ज्ञात कीजिए।

सामान का दुरुपयोग न करें।

- Ans
- ✗ 1. निरूपयोग
  - ✗ 2. कठोर
  - ✓ 3. सदुपयोग
  - ✗ 4. कुरूपयोग

Q.11 निम्नलिखित प्रश्न में, चार विकल्पों में से, उस विकल्प का चयन करें जो कोष्ठक में दिए गए शब्द के पर्यायवाची शब्द का सही विकल्प नहीं है।

ईश्वर की शरण में जाना ही (उद्धार) \_\_\_\_\_ प्राप्ति का एक मात्र मार्ग है।

- Ans
- ✗ 1. विमुक्ति
  - ✓ 2. उद्गम
  - ✗ 3. छुटकारा
  - ✗ 4. परित्राण

Q.12 निम्नलिखित वाक्य में रेखांकित भाग के लिए एक सार्थक शब्द ज्ञात कीजिए।

देवताओं का उपवन बहुत सुंदर होता है।

- Ans
- ✗ 1. राधारणी वन
  - ✗ 2. स्वर्ग
  - ✗ 3. अशोकवाटिका
  - ✓ 4. नंदनकानन

Q.13 निम्नलिखित प्रश्न में, चार विकल्पों में से, उस विकल्प का चयन करें जो दिए गए मुहावरे का सही अर्थ वाला विकल्प है।

अलाद्दीन का चिराग

- Ans
- ✗ 1. भाग्य खुलना
  - ✗ 2. पूरी तरह से वश में करना
  - ✓ 3. आश्चर्यजनक वस्तु
  - ✗ 4. आमना-सामना होना

Q.14 दिए गए वाक्य का वह भाग ज्ञात करें, जिसमें कोई त्रुटि है। यदि कोई त्रुटि नहीं है, तो 'कोई त्रुटि नहीं है' चुनें।

'विद्यार्थी' शब्द दो शब्द के योग से बना है – विद्या + अर्थी।

- Ans
- ✓ 1. शब्द के योग से
  - ✗ 2. बना है – विद्या + अर्थी।
  - ✗ 3. कोई त्रुटि नहीं है
  - ✗ 4. 'विद्यार्थी' शब्द दो

Q.15 निम्नलिखित प्रश्न में, दिए गए चार विकल्पों में से, उस विकल्प का चयन करें जो दिए गए मुहावरे के अर्थ को सर्वश्रेष्ठ रूप से व्यक्त करता है।

झाँसा देना

- Ans
- ✗ 1. धोखा होना
  - ✗ 2. भड़काना
  - ✓ 3. धोखा देना
  - ✗ 4. धोखा मिलना

Comprehension:

नीचे दिए गए गद्य में कुछ शब्द छोड़ दिए गए हैं और प्रत्येक रिक्त स्थान के चार विकल्प दिए गए हैं। इन चारों में से कौन सा विकल्प रिक्त स्थान की पूर्ति करेगा-

डॉक्टर्स विदाउट बॉर्डर्स, जिसे मेडिसिन्स सैन्स फ्रंटियर्स (एमएसएफ) के नाम से भी जाना जाता है, फ्रांस का एक गैर-सरकारी (1)\_\_\_\_\_ है जो युद्ध क्षेत्रों और बीमारियों से (2)\_\_\_\_\_ देशों में मानवीय चिकित्सा देखभाल प्रदान करता है। यह संगठन (3)\_\_\_\_\_ बीमारियों जैसे मधुमेह, दवा-प्रतिरोधी संक्रमण, एचआईवी/एड्स, हेपेटाइटिस सी के उपचार में मदद करता है। एमएसएफ को कई महाद्वीपों पर उनके (4)\_\_\_\_\_ कार्यों के लिए 1999 में नोबेल शांति (5)\_\_\_\_\_ से सम्मानित किया गया था।

SubQuestion No : 16

Q.16 रिक्त 1 के लिए सबसे उपयुक्त विकल्प का चयन कीजिए।

- Ans
- ✗ 1. हार्डवेयर
  - ✗ 2. सांयकाल
  - ✗ 3. सॉफ्टवेयर
  - ✓ 4. संगठन



Comprehension:

नीचे दिए गए गद्य में कुछ शब्द छोड़ दिए गए हैं और प्रत्येक रिक्त स्थान के चार विकल्प दिए गए हैं। इन चारों में से कौन सा विकल्प रिक्त स्थान की पूर्ति करेगा-

डॉक्टर्स विदाउट बॉर्डर्स, जिसे मेडेसिन्स सैन्स फ्रंटियर्स (एमएसएफ) के नाम से भी जाना जाता है, फ्रांस का एक गैर-सरकारी (1)\_\_\_\_\_ है जो युद्ध क्षेत्रों और बीमारियों से (2)\_\_\_\_\_ देशों में मानवीय चिकित्सा देखभाल प्रदान करता है। यह संगठन (3)\_\_\_\_\_ बीमारियों जैसे मधुमेह, दवा-प्रतिरोधी संक्रमण, एचआईवी/एड्स, हेपेटाइटिस सी के उपचार में मदद करता है। एमएसएफ को कई महाद्वीपों पर उनके (4)\_\_\_\_\_ कार्यों के लिए 1999 में नोबेल शांति (5)\_\_\_\_\_ से सम्मानित किया गया था।

SubQuestion No : 17

Q.17 रिक्त2 के लिए सबसे उपयुक्त विकल्प का चयन कीजिए।

- Ans
- 1. परिचय
  - 2. प्रभावित
  - 3. राजपथ
  - 4. अतिक्रमण

Comprehension:

नीचे दिए गए गद्य में कुछ शब्द छोड़ दिए गए हैं और प्रत्येक रिक्त स्थान के चार विकल्प दिए गए हैं। इन चारों में से कौन सा विकल्प रिक्त स्थान की पूर्ति करेगा-

डॉक्टर्स विदाउट बॉर्डर्स, जिसे मेडेसिन्स सैन्स फ्रंटियर्स (एमएसएफ) के नाम से भी जाना जाता है, फ्रांस का एक गैर-सरकारी (1)\_\_\_\_\_ है जो युद्ध क्षेत्रों और बीमारियों से (2)\_\_\_\_\_ देशों में मानवीय चिकित्सा देखभाल प्रदान करता है। यह संगठन (3)\_\_\_\_\_ बीमारियों जैसे मधुमेह, दवा-प्रतिरोधी संक्रमण, एचआईवी/एड्स, हेपेटाइटिस सी के उपचार में मदद करता है। एमएसएफ को कई महाद्वीपों पर उनके (4)\_\_\_\_\_ कार्यों के लिए 1999 में नोबेल शांति (5)\_\_\_\_\_ से सम्मानित किया गया था।

SubQuestion No : 18

Q.18 रिक्त3 के लिए सबसे उपयुक्त विकल्प का चयन कीजिए।

- Ans
- 1. अनुग्रह
  - 2. अत्यंत
  - 3. विनाश
  - 4. विभिन्न

Comprehension:

नीचे दिए गए गद्य में कुछ शब्द छोड़ दिए गए हैं और प्रत्येक रिक्त स्थान के चार विकल्प दिए गए हैं। इन चारों में से कौन सा विकल्प रिक्त स्थान की पूर्ति करेगा-

डॉक्टर्स विदाउट बॉर्डर्स, जिसे मेडेसिन्स सैन्स फ्रंटियर्स (एमएसएफ) के नाम से भी जाना जाता है, फ्रांस का एक गैर-सरकारी (1)\_\_\_\_\_ है जो युद्ध क्षेत्रों और बीमारियों से (2)\_\_\_\_\_ देशों में मानवीय चिकित्सा देखभाल प्रदान करता है। यह संगठन (3)\_\_\_\_\_ बीमारियों जैसे मधुमेह, दवा-प्रतिरोधी संक्रमण, एचआईवी/एड्स, हेपेटाइटिस सी के उपचार में मदद करता है। एमएसएफ को कई महाद्वीपों पर उनके (4)\_\_\_\_\_ कार्यों के लिए 1999 में नोबेल शांति (5)\_\_\_\_\_ से सम्मानित किया गया था।

SubQuestion No : 19

Q.19 रिक्त4 के लिए सबसे उपयुक्त विकल्प का चयन कीजिए।

- Ans
- 1. बेकार
  - 2. मानवीय
  - 3. अनुभव
  - 4. अतिशोक्ति

Comprehension:

नीचे दिए गए गद्य में कुछ शब्द छोड़ दिए गए हैं और प्रत्येक रिक्त स्थान के चार विकल्प दिए गए हैं। इन चारों में से कौन सा विकल्प रिक्त स्थान की पूर्ति करेगा-

डॉक्टर्स विदाउट बॉर्डर्स, जिसे मेडेसिन्स सैन्स फ्रंटियर्स (एमएसएफ) के नाम से भी जाना जाता है, फ्रांस का एक गैर-सरकारी (1)\_\_\_\_\_ है जो युद्ध क्षेत्रों और बीमारियों से (2)\_\_\_\_\_ देशों में मानवीय चिकित्सा देखभाल प्रदान करता है। यह संगठन (3)\_\_\_\_\_ बीमारियों जैसे मधुमेह, दवा-प्रतिरोधी संक्रमण, एचआईवी/एड्स, हेपेटाइटिस सी के उपचार में मदद करता है। एमएसएफ को कई महाद्वीपों पर उनके (4)\_\_\_\_\_ कार्यों के लिए 1999 में नोबेल शांति (5)\_\_\_\_\_ से सम्मानित किया गया था।

SubQuestion No : 20

Q.20 रिक्त5 के लिए सबसे उपयुक्त विकल्प का चयन कीजिए।

- Ans
- 1. दंड
  - 2. भेटो
  - 3. पुरस्कार
  - 4. गेम