

Constable GD in Central Armed Police Forces CAPFs SSF Rifleman GD in Assam Rifles Examination 2024

Exam Date	22/02/2024
Exam Time	2:30 PM - 3:30 PM
Subject	Constable GD Examination 2024

Section : Part-A-General Intelligence and Reasoning

Q.1 Which of the following groups of letters when sequentially placed from left to right will complete the given series?

w_xxyywwx_yywwxxyyww_xyywwxx_y

- Ans**
- 1. wwxx
 - 2. wxyy
 - 3. wwxy
 - 4. wxwx

Q.2 Arrange the given words in the sequence in which they occur in the dictionary.

1. Clamber
2. Clam
3. Claim
4. Clag
5. Clad

- Ans**
- 1. 1,2,3,4,5
 - 2. 5,4,3,2,1
 - 3. 1,2,3,5,4
 - 4. 5,4,3,1,2

Q.3 Six boys Sumit, Gopal, Honey, Ishaan, Jatin and Lalit are sitting around a circular table facing towards the centre. Ishaan is the third to the left of Sumit. Jatin and Honey are the immediate neighbours of Ishaan. Lalit is to the immediate right of Jatin. Who is sitting to the immediate left of Ishaan?

- Ans**
- 1. Honey
 - 2. Jatin
 - 3. Gopal
 - 4. Lalit

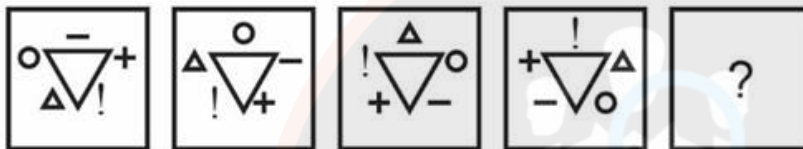
Q.4 Six friends Lisa, Mark, Nicole, Owen, Pam, and Quinn are sitting around a circular table facing away from the center. Lisa is sitting to the immediate right of Mark. Quinn sits exactly between Nicole and Owen. Owen sits to the immediate left of Pam. Who sits to the immediate right of Pam?

- Ans**
- 1. Lisa
 - 2. Mark
 - 3. Quinn
 - 4. Owen

Q.5 In a certain code language, 'FACTS' is coded as '40827', 'FOCUS' is coded as '29741', 'FAME' is coded as '5876'. What is the code for 'T' in that code language?

- Ans**
- 1. 8
 - 2. 4
 - 3. 2
 - 4. 0

Q.6 In the following question, select the figure which can be placed at the sign of question mark (?) from the given alternatives.



Ans

- 1.
- 2.
- 3.
- 4.



Q.7 Arrange the given words in the sequence in which they occur in the dictionary.

1. Example
2. Examine
3. Examination
4. Exact
5. Exactly

- Ans
- 1. 1,5,4,3,2
 - 2. 4,5,3,1,2
 - 3. 4,5,3,2,1
 - 4. 5,1,4,3,2

Q.8 In the following question below are given some statements followed by some conclusions based on those statements. Taking the given statements to be true even if they seem to be at variance from commonly known facts. Read all the conclusions and then decide which of the given conclusion(s) logically follows the given statements.

Statements:

- I. Some table are white.
- II. No road is white.

Conclusions:

- I. No white is road.
- II. No road is table.
- III. No white is table.

- Ans
- 1. All conclusion follows
 - 2. Both conclusions II and III follows
 - 3. Neither conclusion follows
 - 4. Only conclusion I follows

Q.9 Which two signs should be interchanged to make the given equation correct?

$$26 + 2 \div 4 - 8 \times 25 = 30$$

- Ans
- 1. \times and $-$
 - 2. $+$ and \div
 - 3. \times and $+$
 - 4. \times and \div

Q.10 From the given option figures, select the one in which the question figure is hidden/embedded. (rotation is not allowed)



Ans

✗ 1.



✗ 2.



✗ 3.



✓ 4.



Q.11 In a certain code language, 'STAT' is coded as 'PPXP'. What is the code for 'VOID' in that code language?

Ans

✗ 1. SKGY

✓ 2. SKFZ

✗ 3. SKEZ

✗ 4. SJFZ

Q.12 If $28A49B77C11 = -14$ and $30A50B88C22 = -16$, then $85A15B40C8 = ?$

Ans

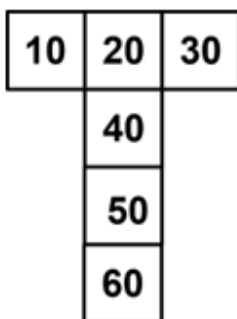
✗ 1. 84

✓ 2. 75

✗ 3. 70

✗ 4. 80

Q.13 On folding the given dice, which number will be opposite to the number '20'?



Ans

✓ 1. 50

✗ 2. 40

✗ 3. 60

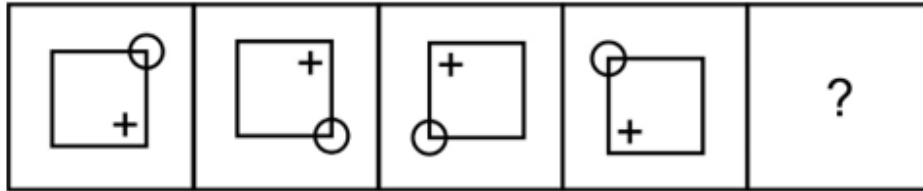
✗ 4. 30

Q.14 In the following question, select the missing number from the given series.

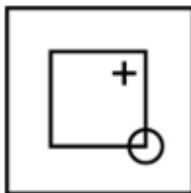
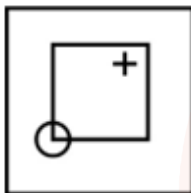
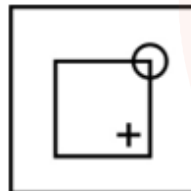
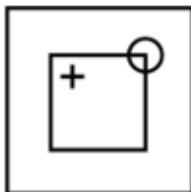
6, 23, 93, 371, 1485, ?

- Ans
- 1. 5999
 - 2. 5939
 - 3. 5980
 - 4. 5940

Q.15 Select the figure that will replace the question mark (?) in the following figure series.



Ans

- 1. 
- 2. 
- 3. 
- 4. 



Q.16 Which of the following numbers will replace the question mark (?) in the given series?

103, 108, 112, 117, 121, 126, ?

- Ans
- 1. 138
 - 2. 127
 - 3. 130
 - 4. 147

Q.17 A series is given with one term missing. Select the correct alternative from the given ones that will complete the series.

AC, FN, KY, PJ,?

- Ans
- 1. MQ
 - 2. UU
 - 3. UW
 - 4. MR

Q.18 Select the option that is related to the fifth word in the same way as the fourth word is related to the third word and the second word is related to the first word.

Individual : Group : Partial : Complete :: Vacant : ?

- Ans
- 1. Occupied
 - 2. Free
 - 3. Available
 - 4. Empty

Q.19 Three positions of a dice are given below. What will come on the face opposite to the face containing 'F' on it?



- Ans
- 1. M
 - 2. I
 - 3. N
 - 4. P

Q.20 Pointing to a man, Karishma said, "He is the husband of only daughter of the father of my brother."

How is that man related to Karishma?

- Ans
- 1. Son
 - 2. Husband
 - 3. wife's father
 - 4. Brother

Section : Part-B-General Knowledge and General awareness

Q.1 Which of the following Indian states has less sex ratio than combined sex ratio of India, according to 2011 census of India?

- Ans
- 1. Gujarat
 - 2. Uttarakhand
 - 3. Jharkhand
 - 4. Assam

Q.2 Which of the following is an example of constitutional bodies in India

- Ans
- 1. National Human Rights Commission
 - 2. Food Corporation of India
 - 3. Law Commission of India
 - 4. The Election Commission of India

Q.3 In July 2023, Aadhav Arjuna was elected as president of the _____ Federation of India .

- Ans
- 1. Badminton
 - 2. Volleyball
 - 3. Baseball
 - 4. Basketball

Q.4 The term 'Green Revolution' refers to the new agricultural technology developed during the 1950s and 1960s by a team of agricultural experts at the International Centre for Maize and Wheat Improvement in Mexico and at the International Rice Research Institute (IRRI) in _____.

- Ans
- 1. Philippines
 - 2. Mexico
 - 3. India
 - 4. New York

Q.5 According to census of India 2011, Least Literate State of India among the given option is:

- Ans
- 1. Himachal Pradesh
 - 2. Bihar
 - 3. Assam
 - 4. Arunachal Pradesh

Q.6 The Indian Parliament comprises of the _____.

- Ans
- 1. President and the two Houses
 - 2. The two Houses only
 - 3. President and Prime Minister only
 - 4. Legislature, Executive and Judiciary

Q.7 Which of the following pair of sports persons – sports associated with is correct?

I. Smriti Mandhana – Hockey

II. Jyothi Yarraji – Cricket

- Ans
- 1. Only I
 - 2. Only II
 - 3. Neither I nor II
 - 4. Both I and II

Q.8 What is the central theme of Poshan Pakhwada 2023, organized by the Ministry of Women and Child Development?

- Ans**
- 1. Increasing imports of millet
 - 2. Environmental sustainability initiatives
 - 3. Women's empowerment in rural areas
 - 4. Millet-based foods for nutritional security

Q.9 Which iconic Indian classical vocalist, often known as the "Mewati Maestro," is celebrated for his mastery of khayal singing and his innovative approach to ragas?

- Ans**
- 1. Pandit Jasraj
 - 2. Hariprasad Chaurasia
 - 3. Zakir Hussain
 - 4. Bismillah Khan

Q.10 Read the following about Deficit reduction.

A. Government deficit can be reduced by an increase in taxes or reduction in expenditure.

B. In India, the government has been trying to increase tax revenue with greater reliance on direct taxes (indirect taxes are regressive in nature – they impact all income groups equally).

Identify the CORRECT statement/statements.

- Ans**
- 1. Neither A nor B
 - 2. Only A
 - 3. Both A and B
 - 4. Only B

Q.11 The "Thrissur Pooram" is a famous temple festival celebrated in which Indian state, known for its elaborate processions and fireworks displays?

- Ans**
- 1. Tamil Nadu
 - 2. Orissa
 - 3. Kerala
 - 4. Karnataka

Q.12 Read the following about Capital receipts.

A. All those receipts of the government which create liability or reduce financial assets are termed as capital receipts.

B. The main items of capital receipts are loans raised by the government from the public which are called market borrowings, borrowing by the government from the Reserve Bank and commercial banks and other financial institutions through the sale of treasury bills, loans received from foreign governments and international organisations, and recoveries of loans granted by the central government.

Identify the CORRECT statement/statements.

- Ans**
- 1. Only B
 - 2. Only A
 - 3. Neither A nor B
 - 4. Both A and B

Q.13 How many triads were mentioned in Dobereiner's Triads?

- Ans
- 1. Eight
 - 2. Two
 - 3. Six
 - 4. Four

Q.14 Name the famous hockey player after which there is a stadium built in New Delhi.

- Ans
- 1. Dhanraj Pillay
 - 2. Sardar Singh
 - 3. Major Dhyan Chand
 - 4. Balbir Singh

Q.15 Giddha dance is mainly related to:

- Ans
- 1. Punjab
 - 2. Bihar
 - 3. Gujarat
 - 4. West Bengal

Q.16 Who is known as the "Father of the Indian Renaissance" and played a pivotal role in the Bengal Renaissance movement?

- Ans
- 1. Bankim Chandra Chattopadhyay
 - 2. Ishwar Chandra Vidyasagar
 - 3. Raja Ram Mohan Roy
 - 4. Rabindranath Tagore

Q.17 The city of _____ was located on Khadir Beyt (also spelled as Bet) in the Rann of Kutch, where there was fresh water and fertile soil.

- Ans
- 1. Lothal
 - 2. Dholavira
 - 3. Harappa
 - 4. Mohenjodaro

Q.18 As on July 2023, India's External Affairs Minister S. Jaishankar filed his nomination papers for the Rajya Sabha elections from which state?

- Ans
- 1. Uttar Pradesh
 - 2. Gujarat
 - 3. Maharashtra
 - 4. Haryana

Q.19 Which dance form from Karnataka involves large drums hung around the necks of men and is known for its religious and battle fervour?

- Ans
- 1. Ghodemodni
 - 2. Kummi
 - 3. Dandiya
 - 4. Dollu Kunitha

Q.20 Which of the following sports is played by Mouma Das?

- Ans
- 1. Table Tennis
 - 2. Hockey
 - 3. Cricket
 - 4. Badminton

Section : Part-C-Elementary Mathematics

Q.1 A sum of Rs. 15,000 invested at compound interest (compounding annually) at the rate of 12% per annum for 2 years. Find the compound interest.

- Ans
- 1. Rs. 4024
 - 2. Rs. 3668
 - 3. Rs. 4124
 - 4. Rs. 3816

Q.2 Average of 12 numbers is 60. If 12 is subtracted from the first five numbers and 10 is added in the next seven numbers, then what will be the new average?

- Ans
- 1. 59.25
 - 2. 60.83
 - 3. 59.75
 - 4. 61.83

Q.3 If 35 percent of P = 60 percent of Q and Q is $(z/3)$ percent of P, then what is the value of z?

- Ans
- 1. 175
 - 2. 165
 - 3. 155
 - 4. 185

Q.4
$$\frac{0.5 \div (0.5 \times 0.5)}{(0.5 \div 0.5) \times 0.5}$$
 ?
What is the value of

- Ans
- 1. 4
 - 2. 0.4
 - 3. 0.2
 - 4. 2

Q.5 What is the value of $49 \times 4 \div 28 + 56 \div 7 \times 8 - 784 \div 28 + 14 \times 2$?

- Ans
- 1. 71
 - 2. 89
 - 3. 101
 - 4. 127

Q.6 The average age of 19 students of a class is 22 years. If a new student of age 42 years joins the class, then what will be the average age of these 20 students?

- Ans
- 1. 28 years
 - 2. 24 years
 - 3. 26 years
 - 4. 23 years

Q.7 Dinesh alone can do a work in 96 hours. Dinesh and Rahul together can do the same work in 48 hours. Rahul and Tarun together can do the same work in 16 hours. In how many hours can Tarun alone do the same work?

- Ans
- 1. 28 hours
 - 2. 19.2 hours
 - 3. 30 hours
 - 4. 20 hours

Q.8 After a discount of 28 percent an article is sold for Rs. 1008. What is the marked price of the article?

- Ans
- 1. Rs. 1450
 - 2. Rs. 1400
 - 3. Rs. 1305
 - 4. Rs. 1350

Q.9 A car left 42 minutes early than the scheduled time but in order to reach its destination 210 km away in time, it had to slow its usual speed by 10 km/hr. What is the usual speed of the car?

- Ans
- 1. 50 km/hr
 - 2. 60 km/hr
 - 3. 40 km/hr
 - 4. 30 km/hr

Q.10 While selling a bag for Rs. 5688, a person suffered a loss of 10 percent. At what price he should have sold the bag to earn a profit of 20 percent?

- Ans
- 1. Rs. 7854
 - 2. Rs. 7216
 - 3. Rs. 7584
 - 4. Rs. 6816

Q.11 If P percent of P is 225, then what is the value of P^2 ?

- Ans
- 1. 20050
 - 2. 20500
 - 3. 22500
 - 4. 22550

Q.12 In a mixture of 110 litre the ratio of water and milk is 4 : 7 respectively. How much water must be added to make the ratio of water and milk as 8 : 7 respectively?

- Ans
- 1. 30 litre
 - 2. 20 litre
 - 3. 40 litre
 - 4. 10 litre

Q.13 A merchant marks the price of his article 50 percent above the cost price. If he allows 20 percent discount, then what is the profit or loss percentage?

- Ans
- 1. 20 percent profit
 - 2. 40 percent loss
 - 3. 30 percent profit
 - 4. 10 percent loss

Q.14 If an article is sold at a loss of 20 percent, then what is the respective ratio of cost price and selling price of the article?

- Ans
- 1. 7 : 4
 - 2. 4 : 5
 - 3. 5 : 4
 - 4. 7 : 8

Q.15 22 men can make a wall in 2 days. How many men are required to complete the same work in half a day?

- Ans
- 1. 72
 - 2. 88
 - 3. 90
 - 4. 80

Q.16 If $4T = 5U$, then what is the value of $(T + U)/T$?

- Ans
- 1. $9/5$
 - 2. $4/9$
 - 3. $5/4$
 - 4. $7/4$

Q.17 What is the value of $13 \times 12 + 12 \times 11 - 14 \times 15 - 9 \times 13 + 19 \times 15$?

- Ans
- 1. 346
 - 2. 146
 - 3. 246
 - 4. 546

Q.18 Find the sides of an equilateral triangle whose area is $16\sqrt{3}$ cm².

- Ans
- 1. 4 cm
 - 2. 12 cm
 - 3. 6 cm
 - 4. 8 cm

Q.19 A certain sum of money becomes 3.5 times of itself in 14 years at a rate of simple interest. In 28 years, that amount it will become how many times of itself at the same rate of simple interest?

- Ans
- 1. 8
 - 2. 4
 - 3. 6
 - 4. 10

Q.20 What is the value of $4500 \div 9 + 1800 \times 2 - 310 \times 7$?

- Ans
- 1. 1941
 - 2. 1935
 - 3. 1930
 - 4. 1825

Section : Part-D-English

Q.1 Find the part of the given sentence that has an error in it. If there is no error, choose 'No error'.
I am sure my mother has something that you shall wear in the evening.

- Ans
- 1. No error
 - 2. shall wear in the evening.
 - 3. has something that you
 - 4. I am sure my mother

Q.2 Select the word segment that substitutes (replaces) the bracketed word segment correctly and completes the sentence meaningfully. Select the option 'no correction required' if the sentence is correct as given.

It grew colder and colder still, and fine, (powdery snow began to fall), so that soon we and all around us were covered with a white blanket.

- Ans
- 1. powdery snow begun on fall
 - 2. powdery snow has begun to fall
 - 3. No correction required
 - 4. powdery snow has been began to fall

Q.3 Find the part of the given sentence that has an error in it. If there is no error, choose 'No error'.
Drink plenty of water and contact your doctor for any worsening symptoms.

- Ans
- ✓ 1. No error
 - ✗ 2. for any worsening symptoms
 - ✗ 3. and contact your doctor
 - ✗ 4. Drink plenty of water

Q.4 Choose the most appropriate synonym of the underlined word.

I have known you for a long time, and possess the most circumstantial details about the plans you were devising.

- Ans
- ✓ 1. Coincidental
 - ✗ 2. Certain
 - ✗ 3. Credible
 - ✗ 4. Direct

Q.5 Choose the word that is opposite in meaning to the given word.

Arrest

- Ans
- ✗ 1. Stall
 - ✗ 2. Standstill
 - ✗ 3. Detain
 - ✓ 4. Unbind

Q.6 In the following question, out of the given four alternatives, select the alternative which best expresses the meaning of the Idiom/Phrase.

To pick somebody's pocket

- Ans
- ✗ 1. To make a very difficult choice
 - ✓ 2. To steal something from the pocket
 - ✗ 3. To choose wisely
 - ✗ 4. To cry for financial help

Q.7 Choose the word that is opposite in meaning to the given word.

Apart

- Ans
- ✓ 1. Nearby
 - ✗ 2. Contaminated
 - ✗ 3. Contagious
 - ✗ 4. Huge

Q.8 Choose the option which is antonym of (opposite of) the word "frugal" in the sentence given below:

Her generous donation to the charity made a significant impact on the lives of those in need.

- Ans
- 1. generous
 - 2. impact
 - 3. charity
 - 4. significant

Q.9 Select the sentence with no spelling errors.

- Ans
- 1. From his childhood, onesty and morality were his darling attributes.
 - 2. From his childhood, honesty and morality were his darling atributes.
 - 3. From his childhood, honesty and morality were his darling attributes.
 - 4. From his childhood, honesty and morallity were his darling attributes.

Q.10 Choose the correct word to complete the sentence:

Navigating through the dense forest, the hikers encountered _____ terrain, making the trek more challenging and adventurous.

- Ans
- 1. predictable
 - 2. monotonous
 - 3. tranquil
 - 4. treacherous

Q.11 Find the part of the given sentence that has an error in it. If there is no error, choose 'No error'.

Neha's handwriting is more clearer than Varun's.

- Ans
- 1. than Varun's
 - 2. No error
 - 3. is more clearer
 - 4. Neha's handwriting

Q.12 Select the most appropriate word to fill in the blank.

He _____ any food until he finishes his homework.

- Ans
- 1. will not get
 - 2. has not get
 - 3. gets not
 - 4. gotten

Q.13 Select the word segment that substitutes (replaces) the bracketed word segment correctly and completes the sentence meaningfully. Select the option 'no correction required' if the sentence is correct as given.

(I were the only one that) could swim, so I made a dash for it.

- Ans**
- 1. I was that only one whom
 - 2. No correction required
 - 3. I were the only one whom
 - 4. I was the only one that

Q.14 Select the incorrectly spelt word from the given sentence.

The patient was conscious after the surgary.

- Ans**
- 1. patient
 - 2. conscious
 - 3. after
 - 4. surgary

Q.15 Choose the idiom/phrase that can substitute the highlighted group of words meaningfully.

The automobile industry is **the source of livelihood** of many people of Manesar.

- Ans**
- 1. In the same boat
 - 2. Bread and butter
 - 3. Through thick and thin
 - 4. Go down the drain

Comprehension:

Read the passage carefully and select the correct answer for the given blanks out of the four alternatives.

As we enter a more permanent (1)_____ of hybrid work for desk-based employees, it's time to find equitable flexibility for frontline (2)_____ like those in manufacturing and healthcare. According to the 2022 Gartner Frontline Worker Experience Reinvented Survey, 58% of organizations (3)_____ employ frontline workers have invested in (4)_____ their employee experience in the past year. About a third of those who haven't done so (5)_____ to do so in the next 12 months.

SubQuestion No : 16

Q.16 Select the most appropriate option for blank(1)

- Ans**
- 1. line
 - 2. era
 - 3. saga
 - 4. spell

Comprehension:

Read the passage carefully and select the correct answer for the given blanks out of the four alternatives.

As we enter a more permanent (1)_____ of hybrid work for desk-based employees, it's time to find equitable flexibility for frontline (2)_____ like those in manufacturing and healthcare. According to the 2022 Gartner Frontline Worker Experience Reinvented Survey, 58% of organizations (3)_____ employ frontline workers have invested in (4)_____ their employee experience in the past year. About a third of those who haven't done so (5)_____ to do so in the next 12 months.

SubQuestion No : 17

Q.17 Select the most appropriate option for blank(2)

- Ans**
- 1. chasers
 - 2. workers
 - 3. bosses
 - 4. personal

Comprehension:

Read the passage carefully and select the correct answer for the given blanks out of the four alternatives.

As we enter a more permanent (1)_____ of hybrid work for desk-based employees, it's time to find equitable flexibility for frontline (2)_____ like those in manufacturing and healthcare. According to the 2022 Gartner Frontline Worker Experience Reinvented Survey, 58% of organizations (3)_____ employ frontline workers have invested in (4)_____ their employee experience in the past year. About a third of those who haven't done so (5)_____ to do so in the next 12 months.

SubQuestion No : 18

Q.18 Select the most appropriate option for blank(3)

- Ans**
- 1. who
 - 2. whom
 - 3. whose
 - 4. that

Comprehension:

Read the passage carefully and select the correct answer for the given blanks out of the four alternatives.

As we enter a more permanent (1)_____ of hybrid work for desk-based employees, it's time to find equitable flexibility for frontline (2)_____ like those in manufacturing and healthcare. According to the 2022 Gartner Frontline Worker Experience Reinvented Survey, 58% of organizations (3)_____ employ frontline workers have invested in (4)_____ their employee experience in the past year. About a third of those who haven't done so (5)_____ to do so in the next 12 months.

SubQuestion No : 19

Q.19 Select the most appropriate option for blank(4)

- Ans**
- 1. regressing
 - 2. improving
 - 3. articulating
 - 4. approaching

Comprehension:

Read the passage carefully and select the correct answer for the given blanks out of the four alternatives.

As we enter a more permanent (1)_____ of hybrid work for desk-based employees, it's time to find equitable flexibility for frontline (2)_____ like those in manufacturing and healthcare. According to the 2022 Gartner Frontline Worker Experience Reinvented Survey, 58% of organizations (3)_____ employ frontline workers have invested in (4)_____ their employee experience in the past year. About a third of those who haven't done so (5)_____ to do so in the next 12 months.

SubQuestion No : 20

Q.20 Select the most appropriate option for blank(5)

- Ans
- ✓ 1. intend
 - ✗ 2. pose
 - ✗ 3. pretend
 - ✗ 4. enact

Section : Part-D-Hindi

Q.1 दिए गए वाक्य में उचित विदेशज शब्द का चयन करके रिक्त स्थान की पूर्ति कीजिए।

_____ हमारे देश का राष्ट्रीय फूल है।

- Ans
- ✗ 1. गुलाभ
 - ✓ 2. गुलाब
 - ✗ 3. बाग
 - ✗ 4. गुलाम

Q.2 दिए गए वाक्य में उचित देशज-विदेशज शब्द चयन करके रिक्त स्थान की पूर्ति कीजिए।

तुम चिंता न करो। तुम्हारी _____ माफ हो गई है।

- Ans
- ✗ 1. लालटेन
 - ✓ 2. फीस
 - ✗ 3. समन
 - ✗ 4. मील

Q.3 दिए गए वाक्य में उचित पर्यायवाची शब्द का चयन करके रिक्त स्थान की पूर्ति करें।

_____ (वासना) में इतने मत डूबो कि वक्त का पता ही न चले।

- Ans
- ✓ 1. भोग
 - ✗ 2. दुःख
 - ✗ 3. पावन
 - ✗ 4. खौफ

Q.4 दिए गए शब्द का पर्यायवाची ज्ञात कीजिए।

उपकार

- Ans
- ✓ 1. कल्याण
 - ✗ 2. करतब
 - ✗ 3. श्रेष्ठ
 - ✗ 4. अटपटा

Q.5 निम्नलिखित वाक्य में रेखांकित भाग के लिए एक सार्थक शब्द ज्ञात कीजिए।

रेखा कम बोलती है।

- Ans
- ✓ 1. मितभाषी
 - ✗ 2. मृदुभाषी
 - ✗ 3. मातृभाषी
 - ✗ 4. समभाषी

Q.6 दिए गए विकल्पों में से तीन विकल्प त्रुटियुक्त हैं, जबकि एक सही है। उस सही विकल्प का चयन करें।

- Ans
- ✗ 1. अधिकाँश लोग अवकाश पर हैं।
 - ✗ 2. एक लोग अवकाश पर हैं।
 - ✓ 3. अधिकतर लोग अवकाश पर हैं।
 - ✗ 4. कोई लोग अवकाश पर हैं।

Q.7 निम्नलिखित वाक्य में, उस वाक्यांश को पहचानिए जिसमें अशुद्धियाँ हैं। यदि कोई गलती नहीं है तो 'कोई त्रुटि नहीं है' का चुनाव कीजिए।

मनुष्य जीवन ही ऐसा है कि वह किसी भी अवस्था में/ यह अनुभव नहीं कर सकता कि अब उसके/ लिए किसी आवश्यकता नहीं ही गई है।

- Ans
- ✗ 1. कोई त्रुटि नहीं है
 - ✗ 2. मनुष्य जीवन ही ऐसा है कि वह किसी भी अवस्था में
 - ✓ 3. लिए किसी आवश्यकता नहीं ही गई है
 - ✗ 4. यह अनुभव नहीं कर सकता कि अब उसके

Q.8 दिए गए वाक्य का वह भाग ज्ञात करें, जिसमें कोई त्रुटि है।

जिसकी लाठी उसके भैंस वाली कहावत चरितार्थ होती है।

- Ans
- ✗ 1. होती है।
 - ✗ 2. जिसकी लाठी
 - ✗ 3. कहावत चरितार्थ
 - ✓ 4. उसके भैंस वाली

Q.9 दिए गए वाक्य में रेखांकित शब्द का विलोम शब्द ज्ञात कीजिए।

राक्षस वीभत्स दिखता है।

- Ans
- ✗ 1. कायर
 - ✗ 2. घोर
 - ✓ 3. आकर्षक
 - ✗ 4. आबाद

Q.10 निम्नलिखित प्रश्न में, चार विकल्पों में से, उस सही विकल्प का चयन करें जो वाक्यांशों के लिए एक शब्द का विकल्प हो।
जो भला बुरा न समझता हो

- Ans
- ✓ 1. अविवेकी
 - ✗ 2. अविभक्त
 - ✗ 3. अविचारित
 - ✗ 4. अविभाज्य

Q.11 निम्नलिखित प्रश्न में, चार विकल्पों में से, उस विकल्प का चयन करें जो कोष्ठक में दिए गए शब्द के विलोम शब्द का सही विकल्प है।
मैं अपने मित्र की बातों से ज़रा भी (अनाहत) _____ नहीं हूँ।

- Ans
- ✗ 1. आश्रित
 - ✗ 2. आदृत
 - ✗ 3. आतुर
 - ✓ 4. आहत

Q.12 निम्नलिखित प्रश्न में, चार विकल्पों में से, उस विकल्प का चयन करें जो दी गई लोकोक्ति का सही अर्थ वाला विकल्प है।
अपने मरे बिना स्वर्ग नहीं दिखता

- Ans
- ✗ 1. दूसरे की वस्तु का निर्भय और उन्मुक्त उपभोग
 - ✗ 2. अपने मुंह से अपनी बड़ाई करने वाला व्यक्ति
 - ✓ 3. अपने किये बिना काम नहीं होता
 - ✗ 4. सब लोगों का अपनी-अपनी धुन में मस्त रहना

Q.13 निम्नलिखित प्रश्न में, दिए गए चार विकल्पों में से, उस विकल्प का चयन करें जो दिए गए मुहावरे के अर्थ को सर्वश्रेष्ठ रूप से व्यक्त करता है।

कलाई खुलना

- Ans
- ✗ 1. हाथ टूटना
 - ✗ 2. हाथ छूटना
 - ✓ 3. भेद खुलना
 - ✗ 4. धागा खोलना

Q.14 दिए गए वाक्य में रेखांकित शब्द के लिए सही वर्तनी ज्ञात कीजिए।

आप प्रांतकाल आइए।

- Ans
- ✗ 1. प्रात कालः
 - ✗ 2. प्रातःकल
 - ✗ 3. प्रांतकाल
 - ✓ 4. प्रातःकाल

Q.15 निम्नलिखित प्रश्न में, चार विकल्पों में से, उस सही विकल्प का चयन करें जो वाक्यांशों के लिए एक शब्द का विकल्प हो।

समान दृष्टि से देखने वाला

- Ans
- ✗ 1. स्तवक
 - ✗ 2. क्षणभंगुर
 - ✗ 3. सनातन
 - ✓ 4. समदर्शी

Comprehension:

नीचे दिए गए गद्य में कुछ शब्द छोड़ दिए गए हैं और प्रत्येक रिक्त स्थान के चार विकल्प दिए गए हैं। इन चारों में से कौन सा विकल्प रिक्त स्थान की पूर्ति करेगा-

भारतीय संविधान में सरकार के अधिकारियों के (1)_____ एवं नागरिकों के (2)_____ के बारे में विस्तार से बताया गया है। विशेष बात यह है कि देश की स्वतंत्रता के पश्चात संविधान सभा के सदस्य ही देश की संसद के प्रथम (3)_____ बने थे। देश की संविधान सभा का चुनाव भारतीय (4)_____ के निर्माण के लिए ही किया गया था। भारतीय संविधान के अनुसार केंद्रीय कार्यपालिका का संवैधानिक प्रमुख राष्ट्रपति होता है। भारतीय संविधान का निर्माण करने वाली संविधान सभा का (5)_____ 19 जुलाई 1946 को किया गया था।

SubQuestion No : 16

Q.16 रिक्त 1 के लिए सबसे उपयुक्त विकल्प का चयन कीजिए।

- Ans
- ✗ 1. बहुमूल्य
 - ✓ 2. कर्तव्य
 - ✗ 3. जनजाति
 - ✗ 4. वस्त्र

Comprehension:

नीचे दिए गए गद्य में कुछ शब्द छोड़ दिए गए हैं और प्रत्येक रिक्त स्थान के चार विकल्प दिए गए हैं। इन चारों में से कौन सा विकल्प रिक्त स्थान की पूर्ति करेगा-

भारतीय संविधान में सरकार के अधिकारियों के (1)_____ एवं नागरिकों के (2)_____ के बारे में विस्तार से बताया गया है। विशेष बात यह है कि देश की स्वतंत्रता के पश्चात संविधान सभा के सदस्य ही देश की संसद के प्रथम (3)_____ बने थे। देश की संविधान सभा का चुनाव भारतीय (4)_____ के निर्माण के लिए ही किया गया था। भारतीय संविधान के अनुसार केंद्रीय कार्यपालिका का संवैधानिक प्रमुख राष्ट्रपति होता है। भारतीय संविधान का निर्माण करने वाली संविधान सभा का (5)_____ 19 जुलाई 1946 को किया गया था।

SubQuestion No : 17

Q.17 रिक्त 2 के लिए सबसे उपयुक्त विकल्प का चयन कीजिए।

- Ans
- 1. पोषण
 - 2. अधिकारों
 - 3. वशीकरण
 - 4. लोकगीत

Comprehension:

नीचे दिए गए गद्य में कुछ शब्द छोड़ दिए गए हैं और प्रत्येक रिक्त स्थान के चार विकल्प दिए गए हैं। इन चारों में से कौन सा विकल्प रिक्त स्थान की पूर्ति करेगा-

भारतीय संविधान में सरकार के अधिकारियों के (1)_____ एवं नागरिकों के (2)_____ के बारे में विस्तार से बताया गया है। विशेष बात यह है कि देश की स्वतंत्रता के पश्चात संविधान सभा के सदस्य ही देश की संसद के प्रथम (3)_____ बने थे। देश की संविधान सभा का चुनाव भारतीय (4)_____ के निर्माण के लिए ही किया गया था। भारतीय संविधान के अनुसार केंद्रीय कार्यपालिका का संवैधानिक प्रमुख राष्ट्रपति होता है। भारतीय संविधान का निर्माण करने वाली संविधान सभा का (5)_____ 19 जुलाई 1946 को किया गया था।

SubQuestion No : 18

Q.18 रिक्त 3 के लिए सबसे उपयुक्त विकल्प का चयन कीजिए।

- Ans
- 1. संत
 - 2. सदस्य
 - 3. प्रभावशाली
 - 4. संविधान

Comprehension:

नीचे दिए गए गद्य में कुछ शब्द छोड़ दिए गए हैं और प्रत्येक रिक्त स्थान के चार विकल्प दिए गए हैं। इन चारों में से कौन सा विकल्प रिक्त स्थान की पूर्ति करेगा-

भारतीय संविधान में सरकार के अधिकारियों के (1)_____ एवं नागरिकों के (2)_____ के बारे में विस्तार से बताया गया है। विशेष बात यह है कि देश की स्वतंत्रता के पश्चात संविधान सभा के सदस्य ही देश की संसद के प्रथम (3)_____ बने थे। देश की संविधान सभा का चुनाव भारतीय (4)_____ के निर्माण के लिए ही किया गया था। भारतीय संविधान के अनुसार केंद्रीय कार्यपालिका का संवैधानिक प्रमुख राष्ट्रपति होता है। भारतीय संविधान का निर्माण करने वाली संविधान सभा का (5)_____ 19 जुलाई 1946 को किया गया था।

SubQuestion No : 19

Q.19 रिक्त 4 के लिए सबसे उपयुक्त विकल्प का चयन कीजिए।

- Ans
- 1. अविश्वसनीय
 - 2. प्रमुख
 - 3. संविधान
 - 4. स्वदेश

Comprehension:

नीचे दिए गए गद्य में कुछ शब्द छोड़ दिए गए हैं और प्रत्येक रिक्त स्थान के चार विकल्प दिए गए हैं। इन चारों में से कौन सा विकल्प रिक्त स्थान की पूर्ति करेगा-

भारतीय संविधान में सरकार के अधिकारियों के (1)_____ एवं नागरिकों के (2)_____ के बारे में विस्तार से बताया गया है। विशेष बात यह है कि देश की स्वतंत्रता के पश्चात संविधान सभा के सदस्य ही देश की संसद के प्रथम (3)_____ बने थे। देश की संविधान सभा का चुनाव भारतीय (4)_____ के निर्माण के लिए ही किया गया था। भारतीय संविधान के अनुसार केंद्रीय कार्यपालिका का संवैधानिक प्रमुख राष्ट्रपति होता है। भारतीय संविधान का निर्माण करने वाली संविधान सभा का (5)_____ 19 जुलाई 1946 को किया गया था।

SubQuestion No : 20

Q.20 रिक्त 5 के लिए सबसे उपयुक्त विकल्प का चयन कीजिए।

- Ans
- 1. गठन
 - 2. समूह
 - 3. समुदाय
 - 4. संघर्ष